

**2008 SAN ANTONIO CLASSICAL SOCIETY
TSJCL AREA B ACADEMIC OLYMPICS
CLASSICAL MONUMENTS AND GEOGRAPHY**

Directions: Please mark the letter of the correct answer on your scantron answer sheet.

Match the ancient name with its modern equivalent.

- | | | | | |
|---------------------|----------------|------------------|---------------|-----------------|
| 1. Hibernia | a) Luxembourg | b) Scotland | c) Wales | d) Ireland |
| 2. Lusitania | a) Belgium | b) Portugal | c) Gallipoli | d) Germany |
| 3. Helvetia | a) Switzerland | b) Liechtenstein | c) Poland | d) Thessaly |
| 4. Lutetia | a) London | b) Lucerne | c) Lyon | d) Paris |
| 5. Camelodunum | a) York | b) Chichester | c) Colchester | d) Bonn |
| 6. Heliopolis | a) Cairo | b) Baalbeck | c) Morocco | d) Tangiers |
| 7. Aelia Capitolina | a) Jerusalem | b) Venice | c) Rome | d) Antioch |
| 8. Pontus Euxinus | a) Red ... | b) Adriatic... | c) Caspian... | d) Black ...Sea |
| 9. Mare Erythraeum | a) Red ... | b) Adriatic... | c) Caspian... | d) Black ...Sea |
| 10. Padus | a) Danube | b) Rhine | c) Po | d) Tigris |

Map of Greece and the Eastern Mediterranean: For questions #11-21, consult Map #1. Match place with the correct numbered spot on the map.

- | | | | | |
|--------------------|-------|-------|-------|-------|
| 11. Sparta | a) 15 | b) 5 | c) 13 | d) 11 |
| 12. Philippi | a) 13 | b) 6 | c) 1 | d) 11 |
| 13. Nicomedia | a) 2 | b) 9 | c) 7 | d) 12 |
| 14. Ilium | a) 12 | b) 8 | c) 17 | d) 14 |
| 15. Rhodes | a) 16 | b) 17 | c) 10 | d) 11 |
| 16. Cnossos | a) 5 | b) 10 | c) 3 | d) 16 |
| 17. Constantinople | a) 9 | b) 2 | c) 8 | d) 7 |
| 18. Halicarnassus | a) 10 | b) 3 | c) 17 | d) 4 |
| 19. Tomi | a) 11 | b) 7 | c) 4 | d) 14 |
| 20. Delphi | a) 15 | b) 5 | c) 13 | d) 1 |
| 21. Dyrrachium | a) 13 | b) 6 | c) 11 | d) 4 |

Map of the Roman Empire: For questions #22-35, consult Map #2. Match place with the correct numbered spot on the map.

- | | | | | | |
|-----|-------------------|-------|-------|-------|-------|
| 22. | Baetica | a) 6 | b) 5 | c) 9 | d) 7 |
| 23. | Bithynia | a) 31 | b) 27 | c) 38 | d) 36 |
| 24. | Dacia | a) 25 | b) 15 | c) 30 | d) 27 |
| 25. | Germania Inferior | a) 11 | b) 12 | c) 9 | d) 7 |
| 26. | Reatia | a) 7 | b) 15 | c) 27 | d) 31 |
| 27. | Noricum | a) 25 | b) 9 | c) 16 | d) 27 |
| 28. | Asia | a) 36 | b) 35 | c) 31 | d) 27 |
| 29. | Cyrenaica | a) 45 | b) 33 | c) 23 | d) 22 |
| 30. | Thracia | a) 31 | b) 27 | c) 26 | d) 12 |
| 31. | Mare Adriaticum | a) A | b) B | c) C | d) D |
| 32. | Cyprus | a) 34 | b) 20 | c) 19 | d) 44 |
| 33. | Dalmatia | a) 16 | b) 37 | c) 43 | d) 25 |
| 34. | Corsica | a) 20 | b) 19 | c) 24 | d) 18 |
| 35. | Aquitania | a) 7 | b) 8 | c) 6 | d) 10 |

Map of Italy: For questions #36-47, consult Map #3. Match place with the correct numbered spot on the map.

- | | | | | | |
|-----|------------------------------------|-------|-------|-------|-------|
| 36. | Arpinum | a) 29 | b) 26 | c) 2 | d) 5 |
| 37. | Cannae | a) 29 | b) 30 | c) 34 | d) 35 |
| 38. | Patvium | a) 5 | b) 14 | c) 6 | d) 29 |
| 39. | Messana | a) 36 | b) 39 | c) 37 | d) 35 |
| 40. | Aquileia | a) 13 | b) 29 | c) 6 | d) 14 |
| 41. | Brundisium | a) 32 | b) 30 | c) 29 | d) 16 |
| 42. | Agrigentum | a) 38 | b) 35 | c) 36 | d) 37 |
| 43. | Pisae | a) 2 | b) 6 | c) 12 | d) 5 |
| 44. | Metapontum | a) 29 | b) 16 | c) 32 | d) 5 |
| 45. | Pompeii | a) 45 | b) 43 | c) 47 | d) 48 |
| 46. | Corsica <i>Sardinia</i> | a) 23 | b) 22 | c) 40 | d) 34 |
| 47. | Ravenna | a) 6 | b) 2 | c) 12 | d) 10 |

Illustrations: For questions #48-70, consult the pictures after the maps.

For questions #48-58, consult Picture A.

48. Picture A shows the Roman Forum at the time of Augustus. What temple, built by a later emperor (and, consequently, not shown in this picture), stood in the small empty space between letters B and C by the end of the 1st century AD?

- a) Isis b) Vespasian c) Antoninus Pius d) Venus and Rome

49. Which letter in Picture A labels a building or area that was NOT built by the order of Julius Caesar?

- a) P b) D c) M d) L

In Picture A choose the letter that labels...

50. ... the building where the Roman treasury was stored.

- a) F b) K c) B d) C

51. the structure decorated with trophies from captured enemy ships.

- a) I b) K c) E d) P

52. ...the building vowed by Augustus to commemorate the avenging of Julius Caesar's murder.

- a) P b) M c) G d) K

53. ... the Curia.

- a) M b) G c) F d) K

54. ...the location of Julius Caesar's cremation.

- a) G b) H c) F d) I

55. ... the temple vowed by the dictator Postumius after the battle of Lake Regillus because of the supposed sighting of divine horsemen.

- a) G b) H c) F d) I

56. ... the official archives of Rome.

- a) A b) B c) J d) D

57. ... the Temple of Vesta.

- a) G b) B c) C d) H

58. ... the Temple of Venus Genetrix.

- a) P b) B c) M d) K

For questions #59-60, consult Picture B.

59. In Picture B you see a famous structure that built by Hadrian as a restoration and possibly a complete redesign of an earlier temple. Who built the original?

- a) Julius Caesar b) Tiberius c) Pompey d) Agrippa

60. In what area of Rome would you find the building in Picture B?

- a) Palatine b) Campus Martius c) Janiculum d) Forum of Augustus

61. **Consult Picture C.** Almost 100 feet of which hill had to excavated to construct this shopping center? A) Palatine b) Quirinal c) Esquiline d) Aventine

For questions #62-66, consult Picture D.

Which numbered areas in Picture D, depicting the Imperial Fora, were built by these leaders?

- | | | | | | |
|-------------------|------|------|------|------|------|
| 62. Augustus | a) 1 | b) 2 | c) 3 | d) 4 | e) 5 |
| 63. Vespasian | a) 1 | b) 2 | c) 3 | d) 4 | e) 5 |
| 64. Trajan | a) 1 | b) 2 | c) 3 | d) 4 | e) 5 |
| 65. Nerva | a) 1 | b) 2 | c) 3 | d) 4 | e) 5 |
| 66. Julius Caesar | a) 1 | b) 2 | c) 3 | d) 4 | e) 5 |

For questions #67-68, consult Picture E.

67. In Picture E you see the Basilica...
 a) ...of Maxentius b) ...Julia c) ...Amelia d) ...Ulpia
68. The structures seen in Picture E were financed with the spoils from the conquest of
 a) Britannia b) Carthage c) Parthia d) Dacia

69. Consult Picture F. What ancient city is this?
 a) Herculaneum b) Pompeii c) Alexandria d) Carthage

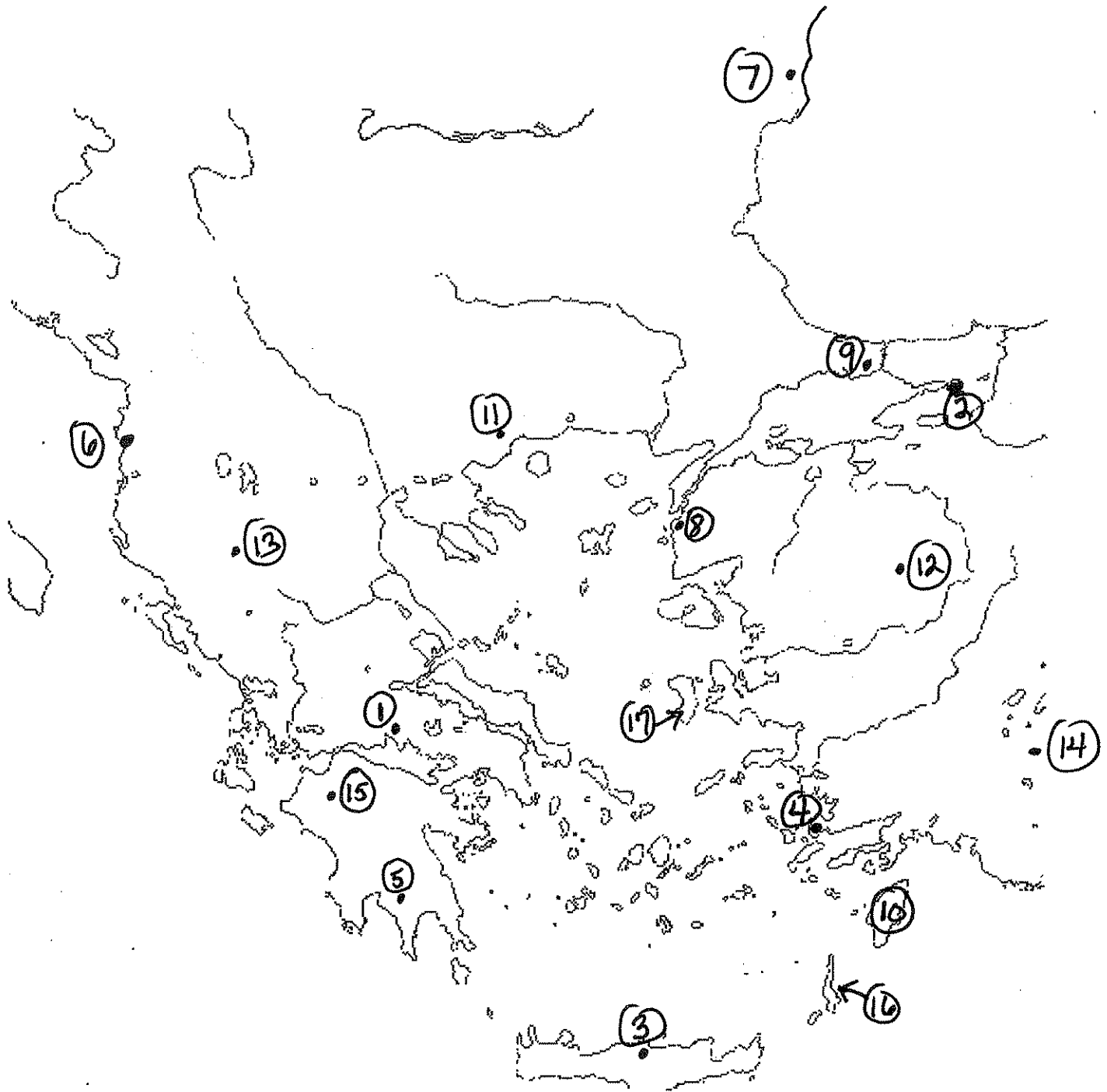
70. Consult Picture G. The massive temple shown in Picture G stood on the Capitoline Hill and was dedicated to the "Capitoline Triad". Each of the doors led to a sanctuary with a statue to one of the three deities in the triad. Which of these was NOT honored at this temple?
 a) Venus b) Jupiter c) Minerva d) Juno

Tie-Breakers: Please bubble your answers for the tie-breakers as #96-100 on your scantron. These questions will only be scored to break ties.

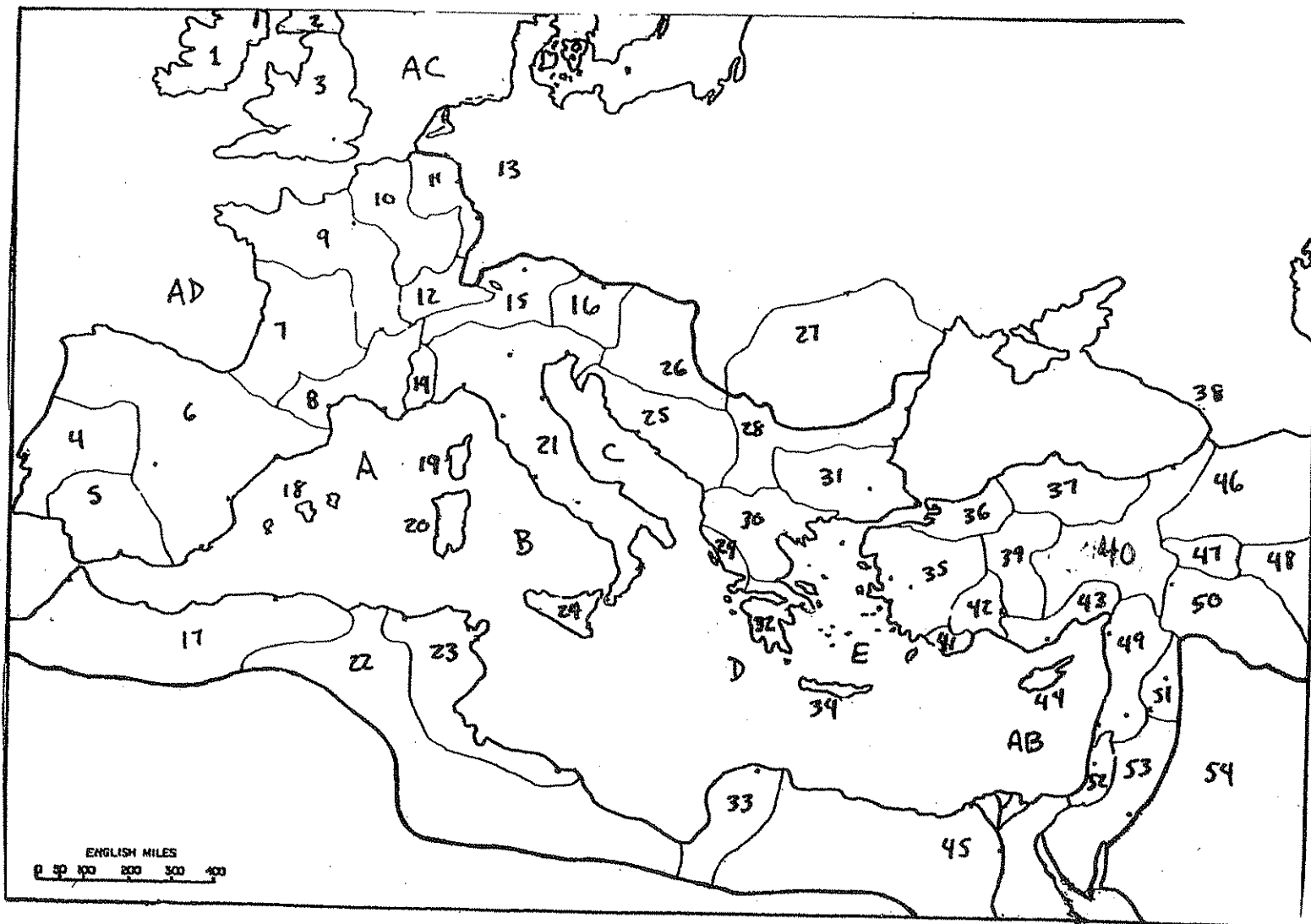
For questions #96-100, refer to the maps and pictures as directed.

96. In Picture G, What temple is this?
 a) Mars Ultor b) Pantheon c) Jupiter Optimus Maximus d) Venus and Rome
97. In Map #2, Caledonia is
 a) 1 b) 2 c) 3 d) 16
98. In Picture C, this structure was built by
 a) Augustus b) Hadrian c) Agrippa d) Trajan
99. In Map #3, Misenum is
 a) 47 b) 45 c) 44 d) 43
100. In Picture A, the building labeled P is the Temple of
 a) Minerva b) Mars Ultor c) Claudius d) Trajan

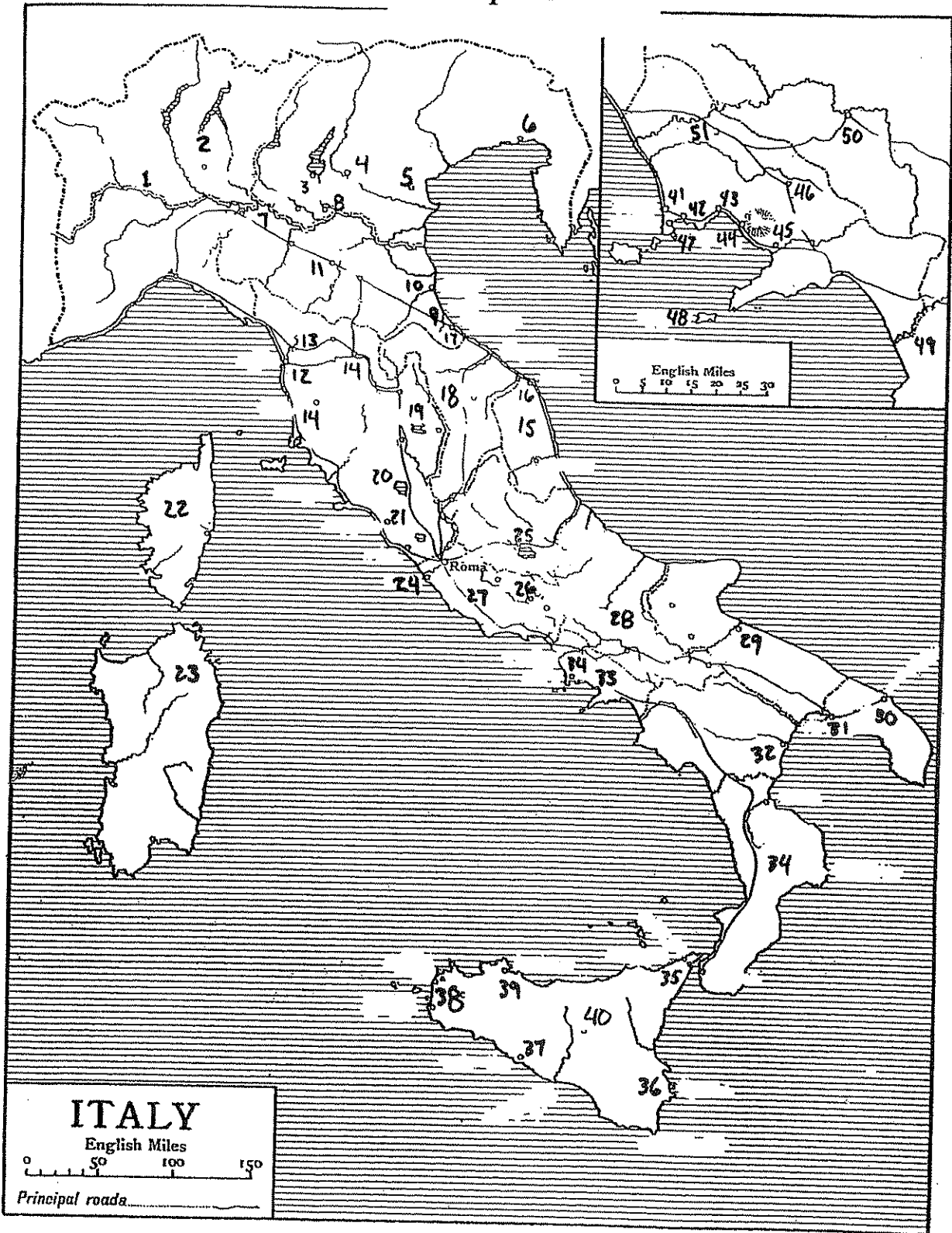
Map # 1




Map # 2



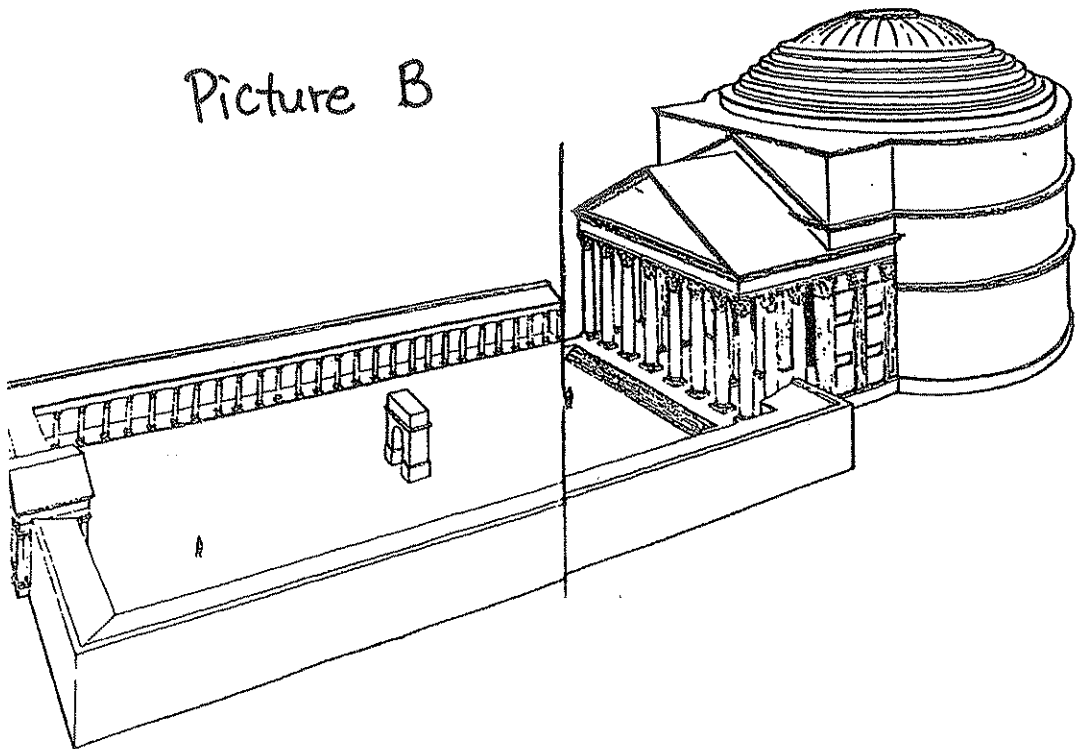
Map # 3




Picture A



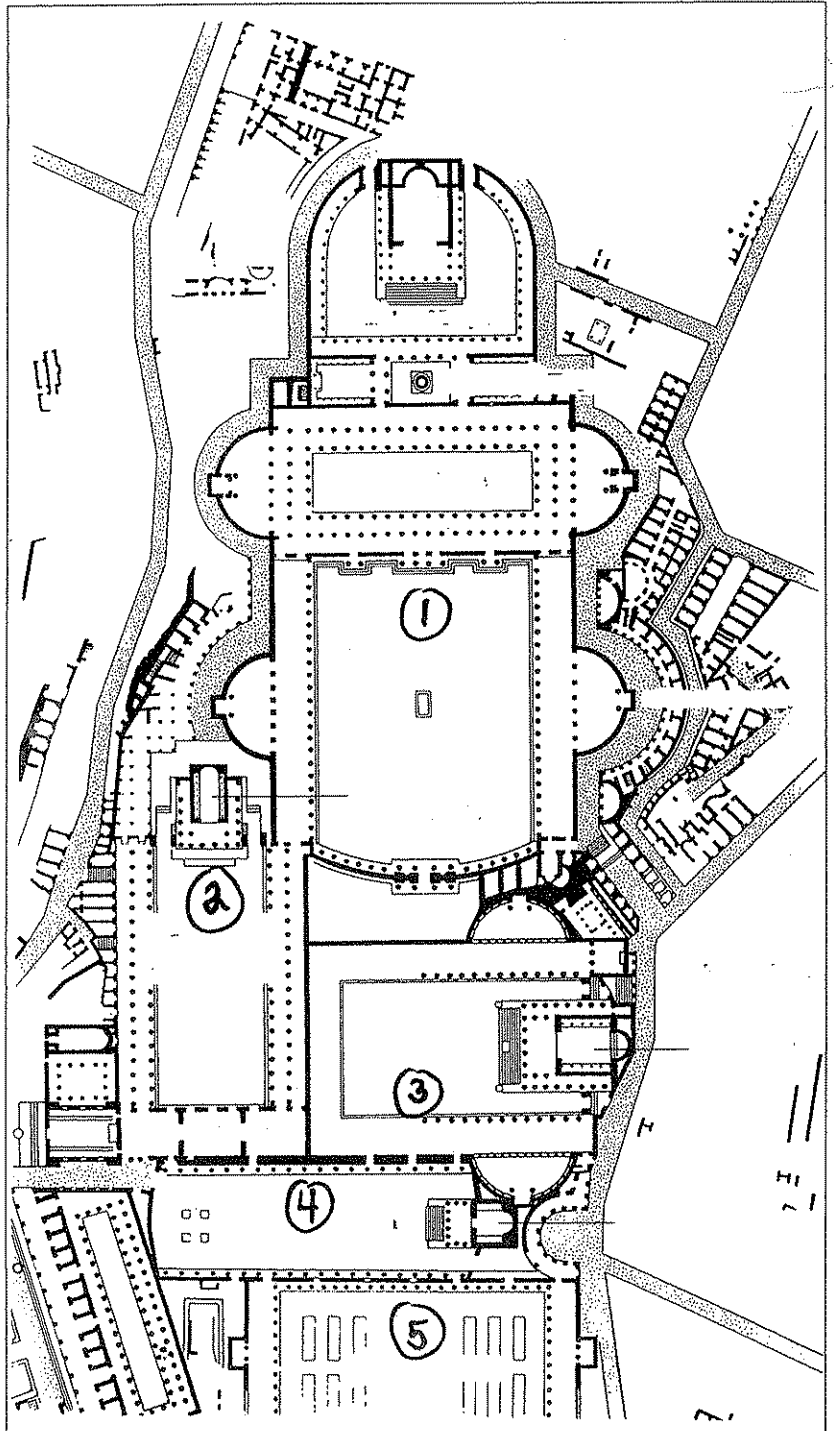
Picture B




Picture C



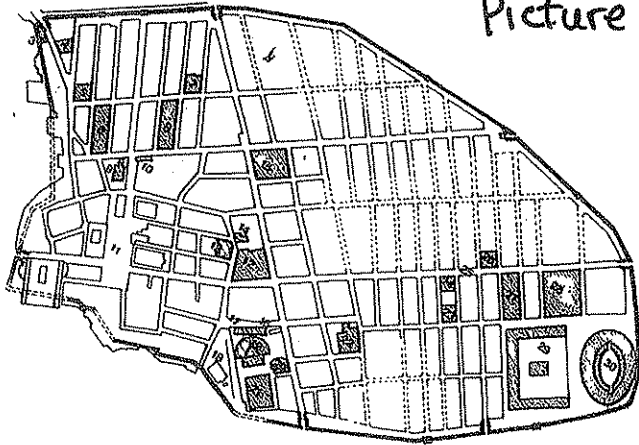
Picture D



Picture E



Picture F



Picture G

