

Happy Summer Vacation





Dear Parents

Please note the following instructions regarding the **holiday homework**.

1. Parents are requested to encourage their child to complete the activities and assignments **independently**.
2. Inspire them to do **neat work** and tell them the importance of neatness.
3. All written assignments are to be done in the **school assignment file**.
4. The **screenshots and videos** of the holidays homework should be submitted on the subject **teachers' personal window (WhatsApp)** by **Friday, July 02, 2021**
5. The assignment files and projects must be kept safely, as they will be collected and checked **on a later date that will be intimated to you**.

Regards
Shivalika Dhillon
Principal

***HAPPY
HOLIDAYS***

ANGEL'S PUBLIC SCHOOL

CLASS – III SESSION 2021 – 22 HOLIDAY HOMEWORK FOR SUMMER VACATION

Subjects	HOLIDAY HOME WORK
English	<p>(1) Be a reporter Family holds a special place in our life. Now is the time to know them even better. So be a live reporter! Interview 2 members of your family (grandparents and parents) and make videos of your selves while taking interviews. You must send the videos to the class teachers. You can ask the following questions during the interview.</p> <ul style="list-style-type: none">(i) Date of birth and the place where they were born.(ii) Their favourite personality.(iii) Why do they like that personality?(iv) Their hobbies.(v) Their favourite dish. <p>(2) Complete attachment-I in your assignment file.</p>
Hindi	<p>(1) निमंत्रण पर और प्रार्थना पत्र लिखें और याद करें in your assignment file.</p> <p>(2) हिन्दी व्याकरण की पुस्तक के पेज नंबर – 25 में दिए गए 'अभ्यास प्रश्न पत्र' पढ़कर नीचे दिए गए प्रश्नों के उत्तर लिखिए in your assignment file.</p>
Maths	<p>(1) Learn and write the tables of (12 – 19) in your assignment file.</p> <p>(2) Complete attachment-II in your assignment file.</p>
E V S	<p>Perform the following activities:</p> <p>(1) Make a forest with dried leaves (colour them), sticks, flowers, animals (picture) mounted on a hard board, put a cellophane sheet on it to preserve it. Take a picture and send it to your class teacher. (For reference see pg no.26 of EVS book)</p> <p>(2) Take four photographs of the activity at its four different stages and forward them.</p> <ul style="list-style-type: none">(i) Take some green lentils (moong).(ii) Soak them over night in water.(iii) Drain out excess water in the morning.(iv) Cover the bowl properly and keep it in a warm place.(v) Open it in the evening. You will find that the lentils have sprouted.(vi) Add some salt and lemon juice and mix it. Your nutritious diet is ready to eat!


PLURAL OF NOUNS

-s -es -ies -ves **IRREGULAR**


 START	girl  x2	cat  !	MOVE ahead 2 spaces!	x2 sandwich 	bus  !
1. Throw the dice.					
! book 	MISS a turn!	tooth  x2		woman  !	leaf  x2
! watch 	2. If there is x2 symbol, say the plural form of the given word.				
x2 box 	potato  x2	GO back 3 spaces!	! t-shirt 	kiss  !	x2 cherry 
3. If there is ! symbol, make a sentence with the plural form of the given word.					GO back to start!
goose  x2	glass  !	umbrella  x2	MOVE ahead 2 spaces!	foot  x2	boy  !
MISS a turn!	the plural form of the given word.				
! brush 	shelf  x2	fireman  !	fish  !	roof  x2	mouse  x2
GOOD LUCK!					MOVE ahead 4 spaces!
FINISH	fox  x2	! briefcase 	x2 fridge 	sausage  !	bag  !

MATHS WORKSHEET (ATTACHMENT NO-II)


WORKING OUT

- 1)  A group of students toss a coin as part of an experiment. They toss 2763 heads and 1589 tails. How many times did they toss a coin?


They tossed a coin _____ times.

- 2)  There are 1675 frogs in one lake and 2453 frogs in another lake. How many frogs in all?


There are _____ frogs in all.

- 3)  In a baseball game, 7258 adult tickets and 1925 children tickets are sold. How many tickets are sold altogether?


There are _____ tickets sold altogether.

- 4)  In a 2-hour traffic survey, 5581 cars are counted in the first hour. 6854 cars are counted in the second hour. How many cars were counted in total?

_____ cars were counted in total.

- 5)  7565 girls and 4127 boys go to see The School of Rock Musical. How many children go in total?

There are _____ children in total.

- 6)  Tyger plants 927 trees in one field and 1069 trees in another field. How many trees has he planted in all?

He has planted _____ trees in all.