



**ANGEL'S PUBLIC
SCHOOL WISHES
YOU
A
HAPPY NEW YEAR 2023**

*Happy
Holidays*



HOLIDAY HOMEWORK

Dear Parents,

The vacations are back again. It is the time to bond and spend quality time with your family and stay warm in this winter season. While you do so, also make it a point to share your childhood stories with them and keep those beautiful eyes away from electronic gadgets as much as possible. Along with creating memories do take out time for these fun holiday activities to keep them mentally active and curious.

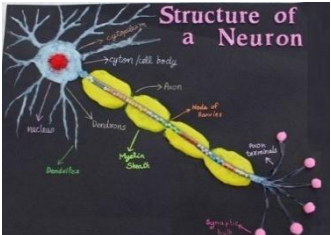
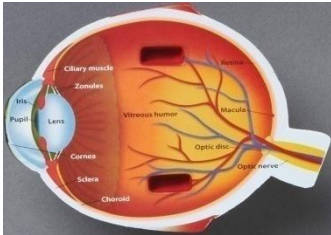
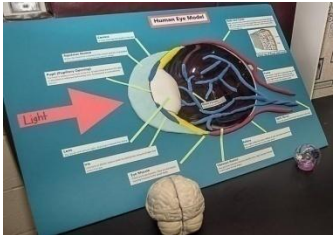

Instructions:

1. Parents are requested to encourage their ward to do the homework independently. Original drawings/ illustrations and creative use of material, wherever required, will be appreciated.
2. The Holiday Homework has been designed to not burden the children with too many assignments and encourage practical learning and creative exhibition of their skills; thus providing ample time to students for leisure activities as well.
3. Worksheets should be done neatly.
4. Devote a fixed amount of time to your homework every day, so that it does not pile up.
5. All homework must be submitted by **Friday, January 6, 2023** to the respective teachers. All assignments are to be done in the school assignment file or as instructed.
6. The project assignment must be completed independently by the students; parents may provide assistance only wherever necessary.
7. A copy of the holiday homework will be available on the school web site : www.angels-school.com



ANGLE'S PUBLIC SCHOOL

CLASS – V HOLIDAY HOMEWORK FOR WINTER VACATIONS SESSION 2022 – 23

SUBJECTS	SYLLABUS
English	<p>(1) (i) Complete the given worksheet. [WORKSHEET ATTACHMENT – I]</p> <p>(ii) Learn the forms of verbs given in the worksheet. [WORKSHEET ATTACHMENT – II]</p> <p>(2) Draw your favourite cartoon character on an A4 size sheet and write 150 words describing the same character in a calligraphic way.</p>
Hindi	<p>(1) शीर्षक के आधार पर कहानी लिखिए :- (क) शीर्षक – ईमानदारी का फल (ख) शीर्षक – घमंड का नतीजा । यह सारा कार्य अपनी assignment file में कीजिए ।</p> <p>(2) हिन्दी व्याकरण :-कोई पाँच पर्यायवाची शब्दों के फ़्लैश कार्ड बनाकर लाए ।</p>
Maths	<p>(1) Complete the given worksheet. [WORKSHEET ATTACHMENT – III]</p> <p>(2) Complete the given worksheet in your assignment file. [WORKSHEET ATTACHMENT – IV]</p>
Science & Social Science	<p>(1) Make a 3 - D Model on the following. (a) Human Eye [Roll No.–01–16],(b) Neuron [Roll No.–17 and above] You can use thermocol, cardboard etc. Kindly refer to the following pictures.</p> <div style="display: flex; justify-content: space-around;"></div> <p>(2) Complete the given worksheets. [WORKSHEET ATTACHMENT – V, VI]</p>
Art & Craft	<p>Make a paper flower wall hanging with the help of colourful papers, cardboard etc.</p>  <p>paper flower wallhanging</p>

[WORKSHEET ATTACHMENT - I]

INDIRECT SPEECH : STATEMENTS

A. Rewrite the sentences. Use indirect speech.

1. "Supriya came home late again."
Aunty told us
2. "Pandas are lazy animals."
The teacher told us
3. "Run three kilometres!"
The coach told us
4. "Amrita didn't have the day off."
The manager said that
5. "We have never been to Kerala."
Mary told me
6. "Jack, don't write on your desk!"
Our teacher told Jack

B. Circle the correct answer.

1. The schools were closed yesterday the cold.
a. despite b. because of
2. Lissa gave up teaching she loved it.
a. although b. because
3. Apoorv isn't very fit he exercises a lot.
a. even though b. because
4. Brijesh is going to Paris he can see the Eiffel Tower.
a. so that b. although
5. I often make pasta it's quick and delicious.
a. although b. because
6. We decided to buy the apartment it was expensive.
a. because b. even though

C. Rewrite the sentences. Use Indirect Speech:

1. "Are you coming home late tonight?"
Mehak asked me if
2. "Does Freida go to the sports club in the evenings?"
Monika asked us if
3. "Can you work at weekends?"
The manager asked me if
4. "How many times have you called Daksh?"
Maitrayee asked me
5. "Do you know how to drive?"
Bipasha asked me

[WORKSHEET ATTACHMENT – II]

VERBS

V1	V2	V3
be	was, were	been
beat	beat	beaten
become	became	become
begin	began	begun
come	came	come
cost	cost	cost
cut	cut	cut
dig	dug	dug
do	did	done
draw	drew	drawn
drive	drove	driven
drink	drank	drunk
eat	ate	eaten
fall	fell	fallen
feel	felt	felt
fight	fought	fought
find	found	found
fly	flew	flown
forget	forgot	forgotten
forgive	forgave	forgiven
freeze	froze	frozen
give	gave	given
go	went	gone
grow	grew	grown
hang	hung	hung
have	had	had
hear	heard	heard
hide	hid	hidden
hit	hit	hit
hold	held	held
hurt	hurt	hurt

V1	V2	V3
keep	kept	kept
know	knew	known
lay	laid	laid
lead	led	led
leave	left	left
lend	lent	lent
lie	lay	lain
lose	lost	lost
make	made	made
ride	rode	ridden
ring	rang	rung
rise	rose	risen
run	ran	run
say	said	said
see	saw	seen
sell	sold	sold
sink	sank	sunk
sit	sat	sat
sleep	slept	slept
speak	spoke	spoken
spend	spent	spent
stand	stood	stood
swim	swam	swum
take	took	taken
teach	taught	taught
tear	tore	torn
tell	told	told
wake	woke	woken
wear	wore	worn
win	won	won
write	wrote	written

[WORKSHEET ATTACHMENT – III]

TIME



What time is on the clock? _____

What time will it be in 5 hours and 40 minutes? _____

What time was it 5 hours ago? _____

What time will it be in 4 hours and 20 minutes? _____



What time is on the clock? _____

What time will it be in 5 hours and 20 minutes? _____

What time was it 3 hours ago? _____

What time will it be in 4 hours and 40 minutes? _____



What time is on the clock? _____

What time will it be in 5 hours and 20 minutes? _____

What time was it 7 hours ago? _____

What time will it be in 1 hour and 40 minutes? _____



What time is on the clock? _____

What time will it be in 2 hours and 20 minutes? _____

What time was it 3 hours and 40 minutes ago? _____

What time will it be in 2 hours? _____

[WORKSHEET ATTACHMENT – IV]

PROFIT AND LOSS

- If Cost Price is Rs. 85 and Selling Price is 105. then what is the profit?
(a) Rs. 15 (b) Rs. 20 (c) Rs 25 (d) Rs. 30
- Johan bought an old motor bike for Rs. 5675 and spent Rs. 453 on it repair. Then he sold it in Rs. 7265, find out the profit he made.
(a) Rs. 1173 (b) Rs. 1371 (c) Rs. 1137 (d) None of these
- Bob bought a cycle for Rs. 3725. After using it for few months he sold it for a loss of Rs. 589. Find the selling price of the cycle.
(a) Rs. 3163 (b) Rs. 3136 (c) Rs. 3236 (d) None of these
- Merry bought a house for Rs. 27.56.723. She stayed in that house for few years and then she sold it for a profit of Rs. 1,52,780. Find the selling price of the house.
(a) Rs 29.99.503 (b) Rs 20.99.503 (c) Rs 29.09.503 (d) None of these
- If Cost Price > Selling Price, then profit is made from the transaction. Mark True/False. (> – greater then)
(a) True (b) False

ANSWER THE FOLLOWING

- 6 hours 55 minutes – 2 hours 20 minutes = _____.
- 4 hours 50 minutes + 2 hours 30 minutes = _____.
- 4 hours 30 minutes + 2 hours 50 minutes = _____.
- 4 hours 25 minutes – 1 hours 20 minutes = _____.
- What is the duration of working hours? = _____.

[WORKSHEET ATTACHMENT – V]

Answer the following in your assignment file.

1. Which road runs between Kolkata in India and Peshawar in Pakistan?
2. Who led the revolt at Jhansi?
3. Name the world's largest passenger aeroplane.
4. When did the Non-Cooperation Movement start?
5. Who invented the steam engine?
6. When was Mangal Pandey hanged to death?
7. Name the Shakespeare of India.
8. Who gave the slogan, "Swaraj is my birth right and I shall have it."?
9. Name the earliest means of water transport.
10. What was discovered by Dr James Simpson?
11. Who was Charaka?
12. Who wrote the play Abhijnana Shakuntalam?
13. When did the revolt of 1857 start?
14. What is seismology?
15. Name any two social reformers.
16. Write the full form of INC.
17. Who were the first to establish trade with India?
18. Who gave the slogan 'Jai Hind'?
19. The British reunited Bengal in _____.
20. Who invented the aeroplane?

[WORKSHEET ATTACHMENT – VI]

Answer the following in your assignment file.

- (a) Where do you find ball and socket joint in your body?
- (b) Which fluid is present inside the membrane of the brain?
- (c) Name the nerves through which retina sends messages to the brain.
- (d) Name the force that acts in the upward direction on an object in water.
- (e) Name the energy in an object which is caused due to its position and its motion.
- (f) Name a machine that consists several simple machines.
- (g) Name the layer of atmosphere where meteoroids and small rocks moving in the space are burnt.
- (h) Name the gas that is essential for burning.
- (i) Name the instrument that is used to measure atmospheric pressure.
- (j) A bright ring of light called Corona can be seen around the sun during which eclipse?
- (k) Name the first artificial satellite that was launched by USSR.
- (l) What are the saucer shaped holes on the moon to surface called?
- (m) Which scale is used to describe the magnitude of earthquake?
- (n) Name the volcanoes that are currently not erupting but may erupt in future.
- (o) Name the active volcano in the Indian subcontinent.