



ANGEL'S PUBLIC SCHOOL

SAMPLE PAPER

PERIODIC TEST – II SESSION 2025 – 26

CLASS – I

TIME : 1:30 HRS

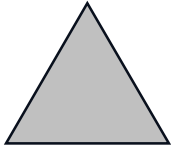
SUBJECT – MATHEMATICS

M.M:40

1. Fill in the blanks.

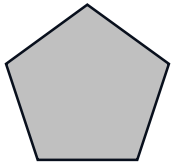
(4)

(a)




This is a _____. It has _____ sides and _____ corners.

(b)




This is a _____. It has _____ sides and _____ corners.

(c)



This is a _____. It has _____ sides and _____ corners.

(d)

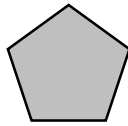


This is a _____. It has _____ sides and _____ corners.

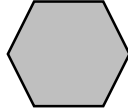
2. Match the shapes with their names.

(4)

(a) Hexagon



(b) Pentagon



(c) Star



(d) Rectangle



3. Fill in the blanks.

(2)

(a) $6+6+6=$ _____

3 times 6 = _____

$3 \times 6 =$ _____

(b) $5 + 5 + 5 + 5 =$ _____

4 times 5 = _____

$4 \times 5 =$ _____

4. Complete the table.

(4)

(a) $6 + 6$ _____

$2 \times$ _____

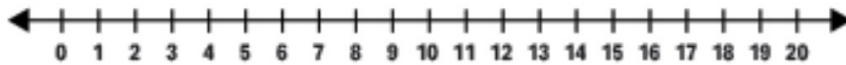
(b) $7 + 7 + 7 + 7$ _____

$4 \times$ _____

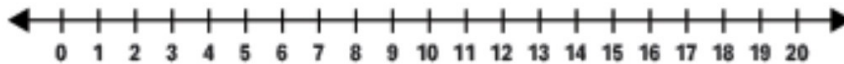
5. Multiplication on number line.

(4)

(a) $7 \times 4 =$ _____



(b) $6 \times 3 =$ _____



6. Fill in the boxes using skip counting.

(3)

(a) 30, 33, 36, _____, _____, _____

(b) 52, 56, 60, _____, _____, _____

(c) 11, 14, 17, _____, _____, _____

7. Multiply.

(6)

(a) T O	(b) T O	(c) T O
6	2	4
X 8	X 5	X 3
_____	_____	_____
_____	_____	_____

(d) T O	(e) T O	(f) T O
8	4	9
X 7	X 2	X 4
_____	_____	_____
_____	_____	_____

8. Dodging.

(6)

(a) $6 \times 2 =$ _____

(b) $4 \times 3 =$ _____

(c) $2 \times 3 =$ _____

(d) $5 \times 6 =$ _____

(e) $8 \times 4 =$ _____

(f) $5 \times 9 =$ _____

9. Answer the following questions.

(3)

(a) What is the shape of a door?

Ans- _____

(b) Which shape has three sides?

Ans- _____

(c) What is the shape of a tyre?

Ans- _____

10. Complete the patterns.

(4)

(a) 2 , 3 , 4 , 2 , 3 , 4 , ____ , ____ , ____

(b) 8 , 4 , 8 , 4 , 8 , 4 , ____ , ____ , 8 , 4

(c)     _____

(d)     _____