

Phase 5 - Assessment Snapshot

Name:

Term:

Year:

Chunk 1:

in 100's: 7,215

Continue
counting
forwards:

Continue
counting
backwards:

in 10's: 7,215

Represent this on the number line:



Chunk 2:

Solve these using addition
and subtraction:

$$0.4 + 0.3 =$$

$$2.6 - 1.1 =$$

$$6.5 + 2.2 =$$

$$0.9 - 0.4 =$$

I had 493 lollipops in my jar. I
ate some and now there were
178. How many did I eat?

Chunk 3:

Solve these by multiplying:

$$32 \times 3 =$$

$$28 \div 2 =$$

$$61 \times 2 =$$

$$100 \div 5 =$$

$$14 \times 10 =$$

$$88 \div 4 =$$

$$4 \times 15 =$$

$$75 \div 3 =$$

Chunk 4:

Write an
equivalent
fraction:

$$\frac{2}{6} \quad \boxed{\quad}$$

Show the
fraction
greater
than 1:

$$\frac{10}{8} =$$



Add these:

$$\frac{6}{8} - \frac{4}{8} =$$

$$\frac{3}{10} + \frac{4}{5} =$$

Assessment Snapshot Notes or Comments:

Phase 5 - Assessment Snapshot

Name:

Term:

Year:

Chunk 1:

Continue
counting
forwards:

in 100's: 7,215

Continue
counting
backwards:

in 10's: 7,215

Represent this on the number line:



Chunk 2:

Solve these using addition
and subtraction:

$$0.4 + 0.3 =$$

$$2.6 - 1.1 =$$

$$6.5 + 2.2 =$$

$$0.9 - 0.4 =$$

I had 493 lollipops in my jar. I ate some and now there were 178. How many did I eat?

Chunk 3:

Solve these by multiplying:

$$32 \times 3 =$$

$$28 \div 2 =$$

$$61 \times 2 =$$

$$100 \div 5 =$$

$$14 \times 10 =$$

$$88 \div 4 =$$

$$4 \times 15 =$$

$$75 \div 3 =$$


Chunk 4:

Write an
equivalent
fraction:

$$\frac{2}{6} \quad \boxed{\quad}$$

Show the
fraction
greater
than 1:

$$\frac{10}{8} =$$



Add these:

$$\frac{6}{8} - \frac{4}{8} =$$

$$\frac{3}{10} + \frac{4}{5} =$$

Phase 5 - Assessment Snapshot

Name:

Term:

Year:

Chunk 1:

Continue
counting
forwards:

in 100's: 7,215

Continue
counting
backwards:

in 10's: 7,215

Represent this on the number line:



Chunk 2:

Solve these using addition
and subtraction:

$$0.4 + 0.3 =$$

$$2.6 - 1.1 =$$

$$6.5 + 2.2 =$$

$$0.9 - 0.4 =$$

I had 493 lollipops in my jar. I ate some and now there were 178. How many did I eat?

Chunk 3:

Solve these by multiplying:

$$32 \times 3 =$$

$$28 \div 2 =$$

$$61 \times 2 =$$

$$100 \div 5 =$$

$$14 \times 10 =$$

$$88 \div 4 =$$

$$4 \times 15 =$$

$$75 \div 3 =$$

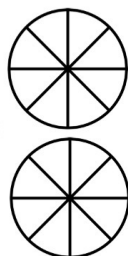
Chunk 4:

Write an
equivalent
fraction:

$$\frac{2}{6} \quad \boxed{\quad}$$

Show the
fraction
greater
than 1:

$$\frac{10}{8} =$$



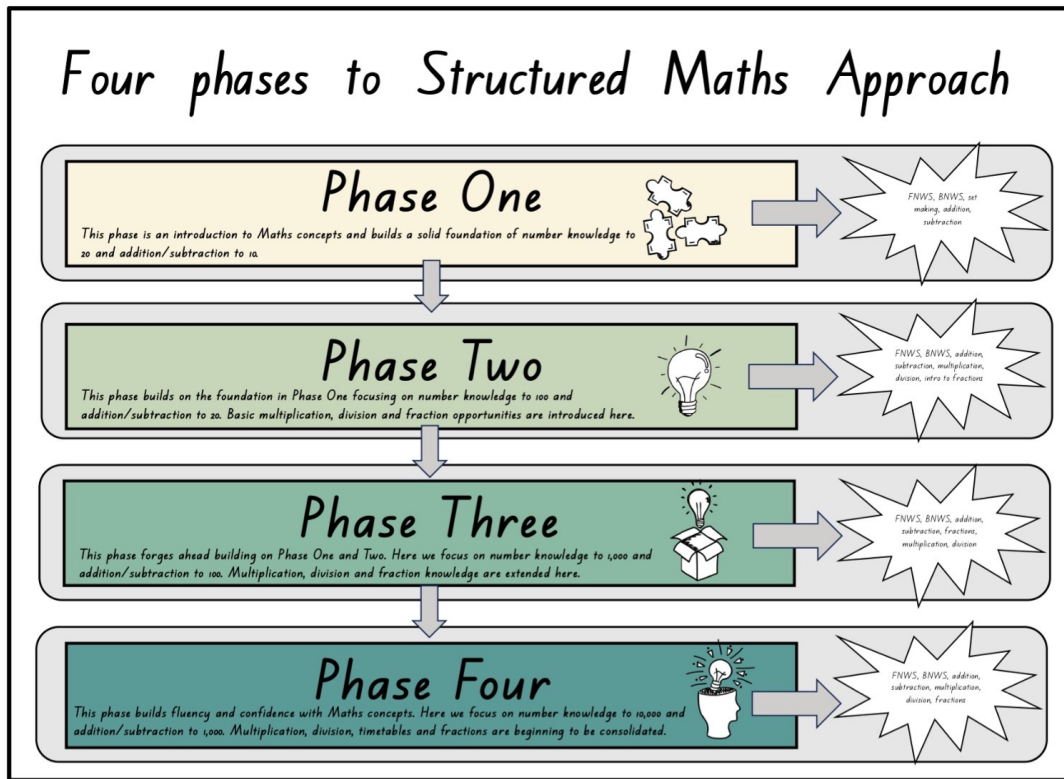
Add these:

$$\frac{6}{8} - \frac{4}{8} =$$

$$\frac{3}{10} + \frac{4}{5} =$$

The Four Phases breakdown to Structured Maths Approach

Here is the complete breakdown to Structured Maths Approach across the four phases and what each chunk will cover with their lessons.



Phase 1 (Year 0 or New Entrants)

Chunk 1 Numbers 1-10	Chunk 2 Add and subtract to 5	Chunk 3 Numbers 11-20	Chunk 4 Add and subtract to 10
-------------------------	----------------------------------	--------------------------	-----------------------------------

Phase 2 (Year 1)

Chunk 1 Numbers 1-100	Chunk 2 Add and subtract to 20	Chunk 3 Number Add and subtract to 20 Fractions	Chunk 4 Multiplication and division Fractions
--------------------------	-----------------------------------	--	---

Phase 3 (Year 2)

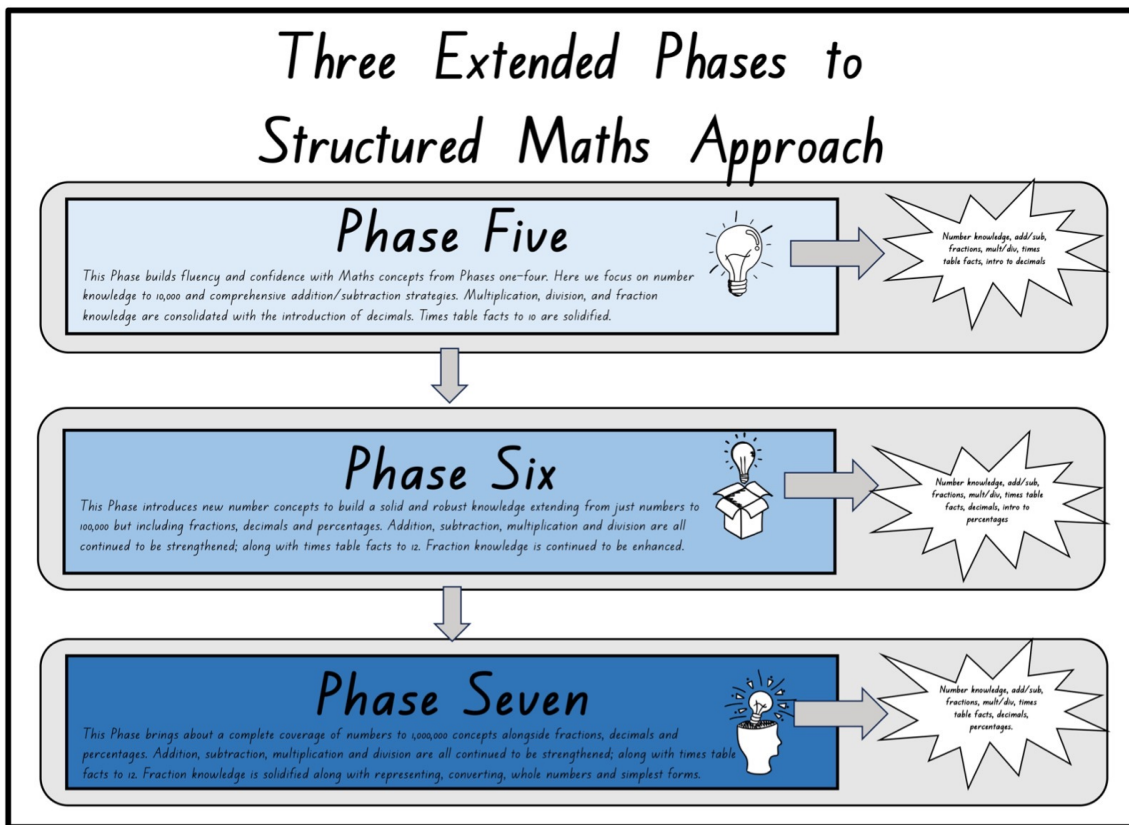
Chunk 1 Numbers 1-1,000	Chunk 2 Add and subtract to 100	Chunk 3 Number Add and subtract to 100 Fractions	Chunk 4 Multiplication and division Fractions
----------------------------	------------------------------------	---	---

Phase 4 (Year 3)

Chunk 1 Numbers 1-10,000	Chunk 2 Add and subtract to 1,000	Chunk 3 Add and subtract to 1,000 Multiplication and division	Chunk 4 Add and subtract to 1,000 Multiplication and division Fractions
-----------------------------	--------------------------------------	---	--

The Three Extended Phases Structured Maths Approach breakdown

Here is the complete breakdown to the extended Structured Maths Approach across the last three additional phases and what each chunk will cover within their lessons. This has been an add-on to the initial Structured Maths Approach plan due to high teacher demand and the need for a continuation for students in higher year groups.



Phase 5 (Year 4)			
Chunk 1 Numbers 1-10,000	Chunk 2 Addition and subtraction	Chunk 3 Multiplication and division	Chunk 4 Fractions

Phase 6 (Year 5)			
Chunk 1 Numbers 1-100,000 Fractions	Chunk 2 Number Addition and subtraction	Chunk 3 Multiplication and division	Chunk 4 Fractions

Phase 7 (Year 6)			
Chunk 1 Numbers 1-1,000,000 Fractions	Chunk 2 Number Addition and subtraction	Chunk 3 Multiplication and division	Chunk 4 Fractions