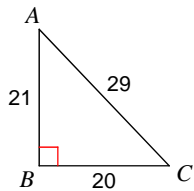


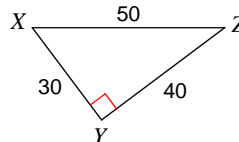
Assignment

Find the value of each trigonometric ratio.

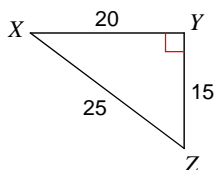
1) $\sin C$



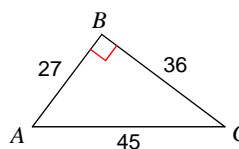
2) $\cos X$



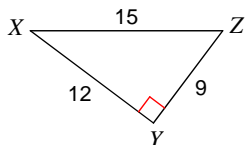
3) $\tan Z$



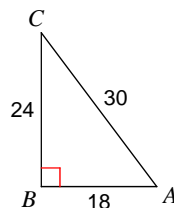
4) $\sin C$



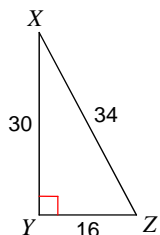
5) $\sin Z$



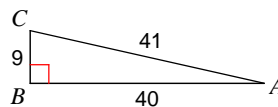
6) $\sin C$



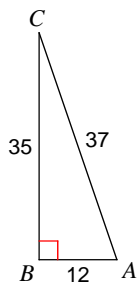
7) $\cos Z$



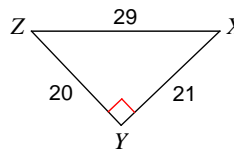
8) $\cos A$



9) $\tan C$



10) $\sin X$



Answers to Assignment (ID: 1)

1) $\frac{21}{29}$

3) $\frac{4}{3}$

5) $\frac{4}{5}$

7) $\frac{8}{17}$

9) $\frac{12}{35}$