

1) Which of the following is the monitor of a computer?

A) ☐



B) ☐



C) ☐



D) ☒



2) Which device is known as the brain of a computer?

A) ☒




B) ☐




C) ☐



D) ☐



 3) What does CPU stand for?

A) ☐ Compressed Program Unit

B) ☒ Central Processing Unit



C) ☐ Closed Processing Unit

D) ☐ Computer Program Unit



4) A monitor is also known as the

---

A) ☐ keyboard.

B) ☐ TV.

C) ☒ visual display unit.



D) ☐ book.

5) Which device will display the pictures and words?

A) ☒



B) ☐




C) ☐



D) ☐





 6) Identify the true statement.

A) ☐ Calculations are performed in CPU.

B) ☐ CPU controls all the functions of a computer.

C) ☐ CPU is the brain of a computer.

D) ☒ All the above



7) Which device is used for entering data into a computer?

A) ☐



B) ☒



C) ☐



D) ☐



8) Which among the following is a pointing device?

A) ☐



B) ☒



C) ☐



D) ☐



9) Which part of the computer will give printouts of documents?

A) ☒



B) ☐



C) ☐



D) ○



10) Which of the following is a multimedia device?

A) ☐



B) ☐



C) ☐



D) ☒ Both (a) and (b)





11) Harsha is listening to music. Which device is he using?

A) ☐



B) ☐



C) ☒



D) ○



12) What is the purpose of the device shown in the picture?



A) ☒ To record a voice



B) ☐ To listen to sounds

C) ☐ To play games

D) ☐ To type documents

13) Which part of the computer is missing in the given picture?




A) ☐ Keyboard

B) ☒ Mouse



C) ☐ CPU

D) ☐ Monitor

 14) Expand UPS.

A) ☐ Uniform Portable Series

B) ☐ Universal Port Series

C) ☒ Uninterrupted Power Supply



D) ☐ User Position State

15) Which device provides emergency power supply to computers when electricity fails?

A) ☐



B) ☐



C) ☐



D) ☒



16) What is this device called?



A) ☒ Scanner




B) ☐ Printer

C) ☐ Keyboard

D) ☐ Laptop



 17) What are the buttons of a keyboard called?


A) ☐ Icons

B) ☐ Click

C) ☐ Wheels

D) ☒ Keys



 18) Which of the following are used to connect the different parts of a computer?

A) ☐ Thread

B) ☒ Data cable



C) ☐ Copper wires

D) ☐ Steel wires

19) Which device is used for scanning pictures to a computer?

A) ☐



B) ☒



C) ☐



D) ☐

20) Which of the following stores information?

A) ☐



B) ☐



C) ☐



D) ☒

