

Name:

Date:

Answer the questions below:

What is 7 degrees - 8 degrees?



What is 14 degrees - 12 degrees?



What is -3 degrees + 9 degrees?



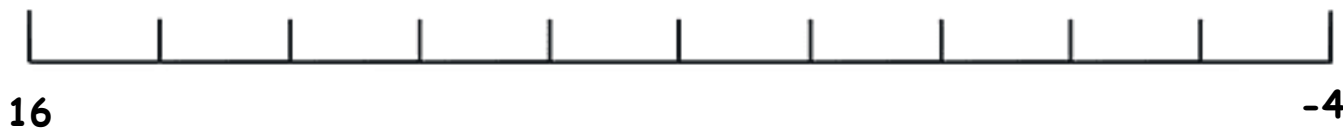
What is 14 degrees - 18 degrees?



Name:

Date:

What is -2 degrees + 15 degrees?



What is 11 degrees - 13 degrees?



What is 15 degrees - 8 degrees?



What is 4 degrees + 8 degrees?




Name:

Date:


Answers:

What is 7 degrees - 8 degrees?




-1

What is 14 degrees - 12 degrees?




2

What is -3 degrees + 9 degrees?



6

What is 14 degrees - 18 degrees?




-4

Name:


Date:

What is -2 degrees + 15 degrees?




13

What is 11 degrees - 13 degrees?



-2

What is 15 degrees - 8 degrees?



7

What is 4 degrees + 8 degrees?



12