


Name:

Date:

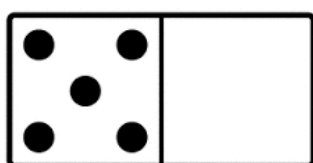
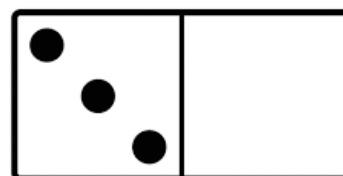
Mark the numbers that could be missing from these statements on the number line.



is greater  
than

?


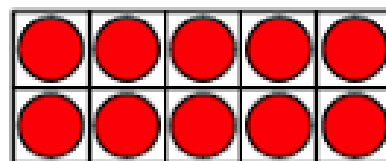
is greater  
than



is greater  
than

?

is greater  
than



>

?


>



Name:

Date:

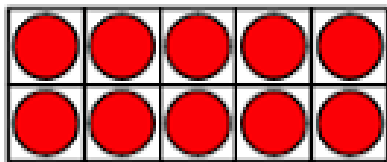
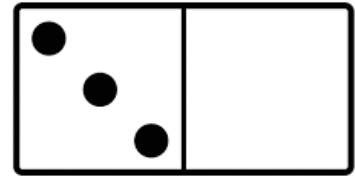
Answers:



is greater  
than

?


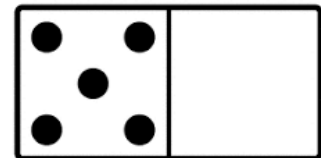
is greater  
than



is greater  
than

?

is greater  
than



>

?

>

