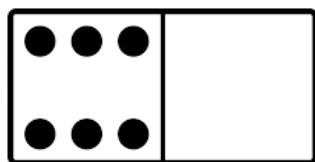


Name:

Date:

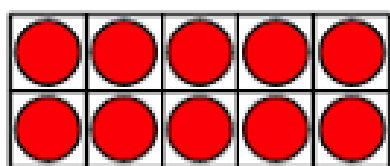

Mark the numbers that could be missing from these statements on the number line.



is less
than

?

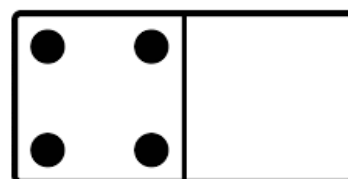
is less
than



is greater
than

?

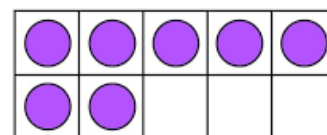
is greater
than



is less
than

?

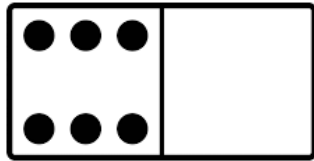
is less
than



Name:

Date:

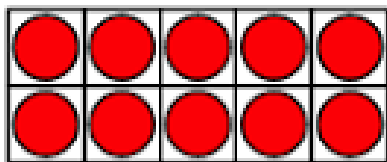

Answers:



is less
than

?

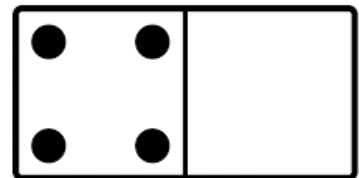
is less
than



is greater
than

?

is greater
than



is less
than

?

is less
than

