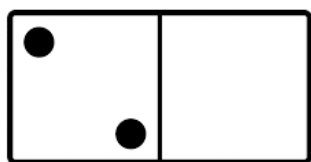


Name:

Date:


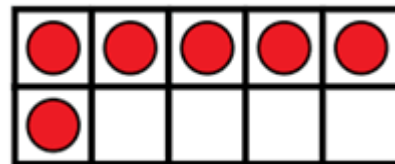
Mark the numbers that could be missing from these statements on the number line.



is less than

?


is less than



is less than

?

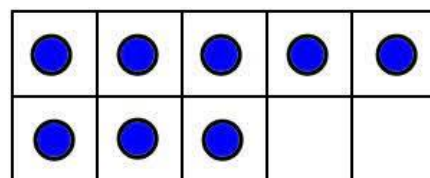
is less than



<

?

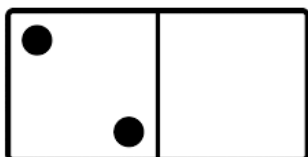
<



Name:

Date:


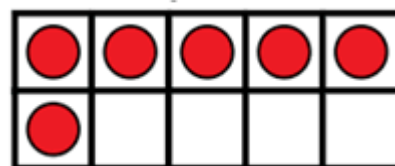
Answers:



is less
than

?


is less
than



is less
than

?

is less
than



<

?

<

