

Date:

The number lines below show the temperatures of a town at midnight and noon on different days.

1. The difference between the temperature is 8°C .



--

(b) What is the temperature at noon?

2. The difference between the temperature is 12°C .



(b) What is the temperature at noon?

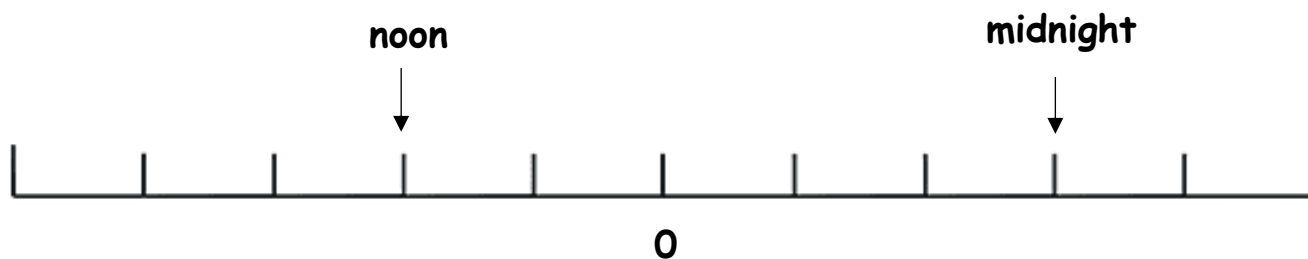
--

Name:

Date:

Wednesday

3. The difference between the temperature is 10°C .

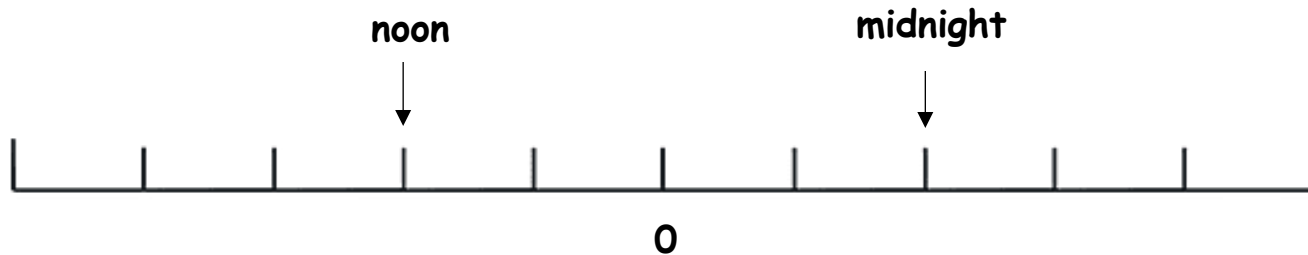


(a) What is the temperature at midnight?

(b) What is the temperature at noon?

Thursday

4. The difference between the temperature is 20°C .



(a) What is the temperature at midnight?

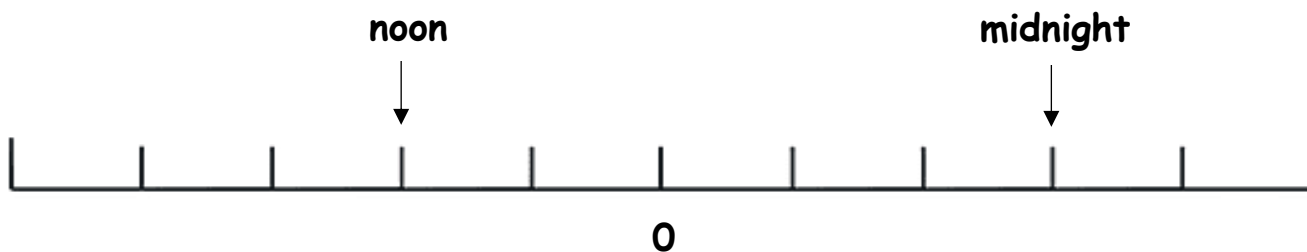
(b) What is the temperature at noon?

Name:

Date:

Friday

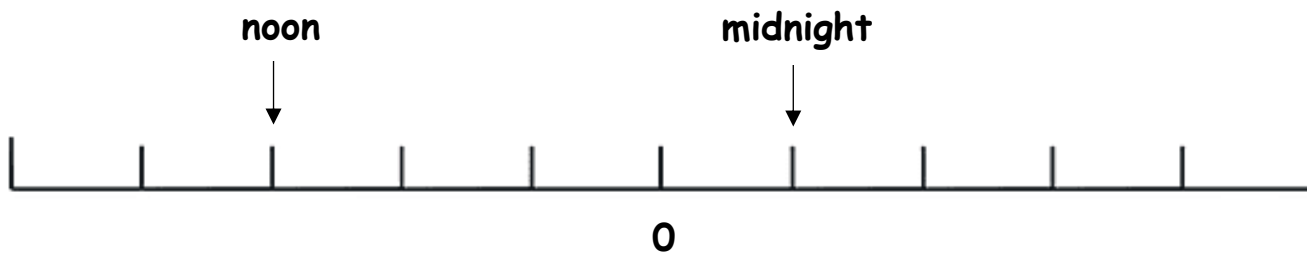
5. The temperature 4°C at noon and -6°C at midnight.



What is the difference in the temperatures?

Saturday

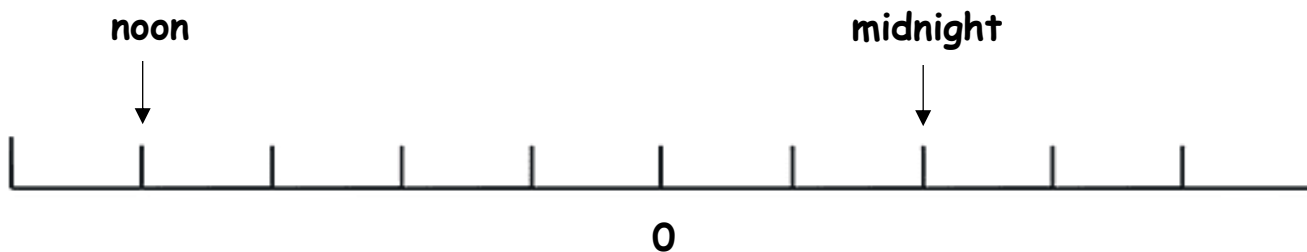
6. The temperature 15°C at noon and -5°C at midnight.



What is the difference in the temperatures?

Sunday

7. The temperature 8°C at noon and -4°C at midnight.



What is the difference in the temperatures?

Name:

Date:

Answers:

1.

(a) -4°C

(b) 4°C

2.

(a) -4°C

(b) 8°C

3.

(a) -6°C

(b) 4°C

4.

(a) -20°C

(b) 20°C

5. 10°C

6. 20°C

7. 12°C