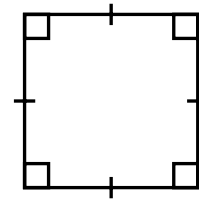
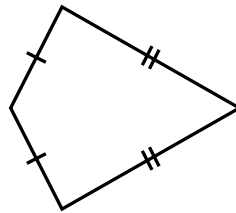
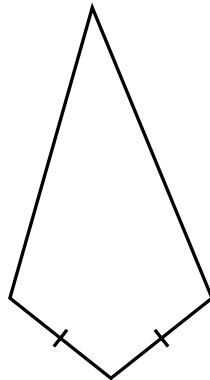




Name _____

Date _____

1. Consider the quadrilaterals shown.



- a. Circle each quadrilateral that can be classified as a kite.
- b. Write the letter S in each quadrilateral that can be classified as a square.

-
2. When can a quadrilateral be classified as a kite?

-
3. When can a rhombus be classified as a square?