



Name \_\_\_\_\_

Date \_\_\_\_\_

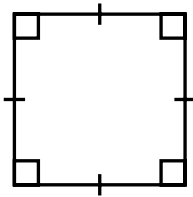
1. Mark each shape with the given property.

<b>Property</b>	<b>Trapezoid</b>	<b>Parallelogram</b>	<b>Rectangle</b>	<b>Rhombus</b>	<b>Square</b>
At least 1 pair of opposite sides are parallel.					
2 pairs of opposite sides are parallel.					
Opposite sides are the same length.					
Diagonals intersect at their midpoints.					
Diagonals intersect at a right angle.					
All sides are the same length.					
All angles are right angles.					

2. Write all the names from the word bank that can be used to classify each figure shown.

Word Bank			
Quadrilateral	Trapezoid	Parallelogram	Rectangle
Square	Rhombus	Kite	

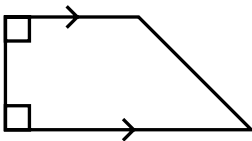
a.



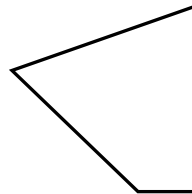
b.



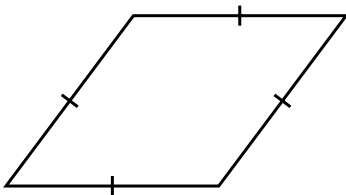
c.



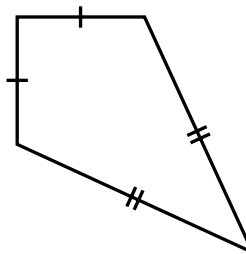
d.



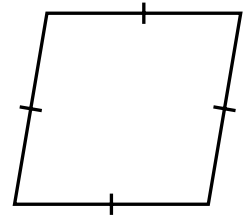
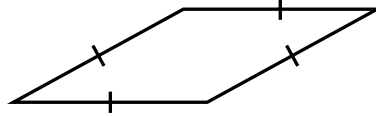
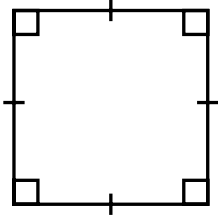
e.



f.



3. Consider the quadrilaterals shown.



a. What properties do the figures have in common?

b. What is the most specific name that could describe all three figures?