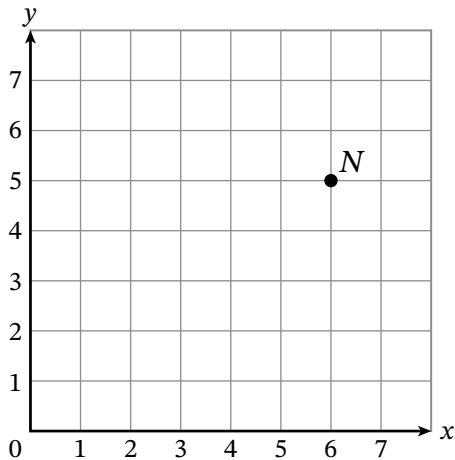




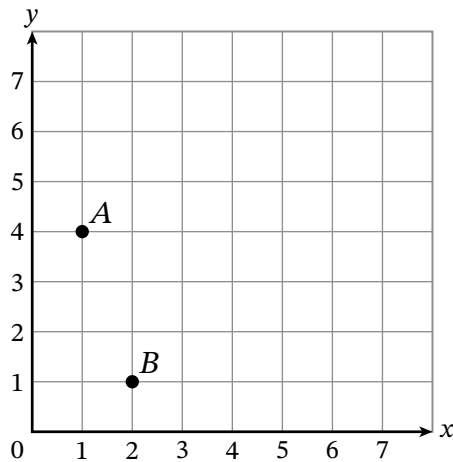
Name \_\_\_\_\_ Date \_\_\_\_\_

1. Consider point *N*.



- a. The *x*-coordinate of point *N* is \_\_\_\_\_.
- b. The *y*-coordinate of point *N* is \_\_\_\_\_.
- c. The ordered pair that identifies the location of point *N* is (\_\_\_\_\_, \_\_\_\_\_)

2. Consider the graph shown.



a. Complete the table for points *A* and *B*.

Point	<i>x</i> -Coordinate	<i>y</i> -Coordinate	Ordered Pair ( <i>x</i> , <i>y</i> )
<i>A</i>			
<i>B</i>			

- b. Plot a point at (5, 7). Label the point *C*.
- c. Plot a point at (7, 3). Label the point *D*.

**REMEMBER**

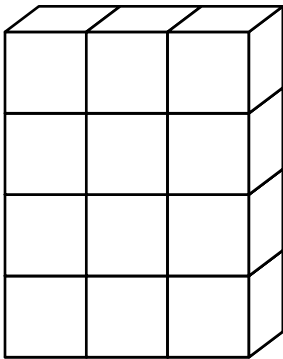
3. Evaluate.

$$(12.8 - 4.5) \times (9.8 - 5) = \underline{\hspace{2cm}}$$

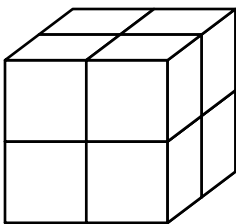
---

4. Which solid has a volume of 8 cubic units?

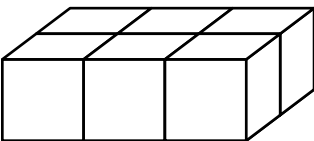
A.



B.



C.



D.

