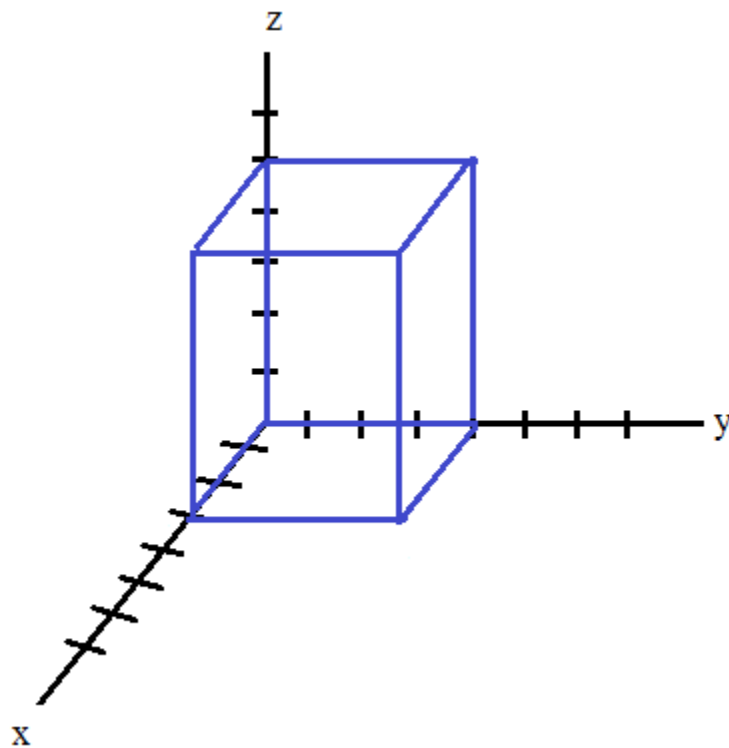


# 3-Dimensional Space and Vectors

Notes, Examples, and Practice Quiz (with Answers)



*Topics include 3-D coordinate plane, area, vector dot product and cross product, equation of a plane, and more.*

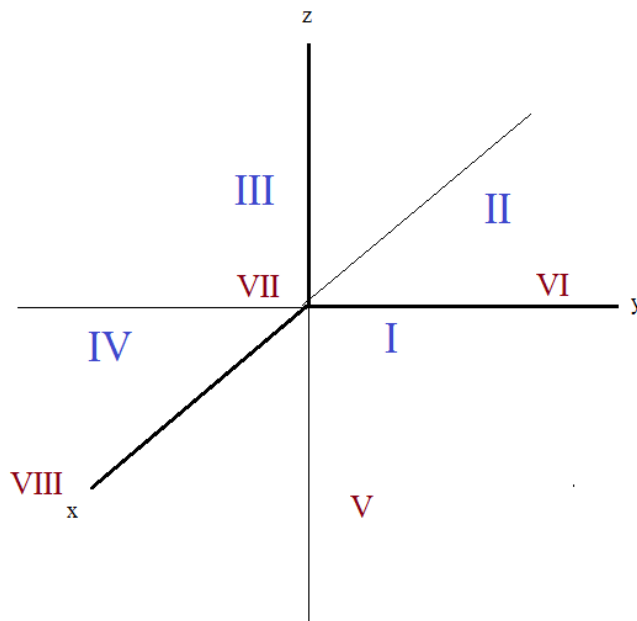
### 3-Dimensional Space

The xy-coordinate plane has 4 "quadrants"....

The xyz-coordinate space has 8 "octants"...

The four quadrants remain I, II, III, IV where z is positive...

Then, octants V, VI, VII, and VIII occur respectively where z is negative...



I, II, III, and IV are above the xy-plane

V, VI, VII, and VIII are below the xy-plane

*Example:* What Octant is the center of sphere  $(x - 4)^2 + (y + 7)^2 + (z - 3)^2 = 9$  ?

The center of the sphere is  $(4, -7, 3)$

Looking at the x and y coordinates:  $(4, -7)$  would lie in quadrant IV

Then, since the z coordinate  $(\quad, \quad, 3)$  is positive, the center lies in quadrant IV

(Note: if the coordinate were  $(4, -7, -3)$ , it would lie in quadrant VIII)

Example: Find the equation of a sphere that passes through the following points:

$$(2, 1, 3) \quad (0, -1, 2) \quad (1, 4, -2) \quad (-1, 1, 3)$$

Step 1: Utilize the general equation of a sphere

$$(2, 1, 3) \implies 4 + 1 + 9 + 2D + 1E + 3F + G = 0$$

$$2D + 1E + 3F + G = -14$$

$$(0, -1, 2) \implies 0 + 1 + 4 + 0D + (-1)E + 2F + G = 0$$

$$-1E + 2F + G = -5$$

$$(1, 4, -2) \implies 1 + 16 + 4 + 1D + 4E + (-2)F + G = 0$$

$$1D + 4E - 2F + G = -21$$

$$(-1, 1, 3) \implies 1 + 1 + 9 + (-1)D + 1E + 3F + G = 0$$

$$-1D + 1E + 3F + G = -11$$

General Equation of a Sphere

$$x^2 + y^2 + z^2 + Dx + Ey + Fz + G = 0$$

Step 2: Solve system of equations

$$2D + 1E + 3F + G = -14$$

$$-1E + 2F + G = -5$$

$$1D + 4E - 2F + G = -21$$

$$-1D + 1E + 3F + G = -11$$

$$D = -1$$

$$E = -43/13$$

$$F = -5/13$$

$$G = -98/13$$

Step 3: Substitute and Simplify

$$x^2 + y^2 + z^2 - 1x - \frac{43}{13}y - \frac{5}{13}z = \frac{98}{13}$$

$$\implies 13x^2 + 13y^2 + 13z^2 - 13x - 43y - 5z - 98 = 0$$

To check answer, plug in each point..

$$\text{Try } (0, -1, 2) \implies 0 + 13 + 52 - 0 + 43 - 10 - 98 = 0 \quad \checkmark$$

Example: Find the 3 traces of the sphere  $(x - 5)^2 + (y + 3)^2 + (z + 1)^2 = 9$

The sphere with center  $(5, -3, -1)$  and radius 3

The xy-trace occurs when  $z = 0 \implies$  circle

$$(x - 5)^2 + (y + 3)^2 = 8$$

The yz-trace occurs when  $x = 0 \implies$  no intersection

$$(y + 3)^2 + (z + 1)^2 = -16$$

The xz-trace occurs when  $y = 0 \implies$  point

$$(x - 5)^2 + (z + 1)^2 = 0$$

Example: What lengths of  $r$  would create a sphere that intercepts the xz and yz planes only?

$$(x - 3)^2 + (y + 4)^2 + (z - 8)^2 = r^2$$

$$4 \leq r < 8$$

if  $r < 8$ , the "z part" of the sphere won't reach the xy-plane...

Then, if  $r \geq 4$ , the "x and y parts" will touch or cross the other planes.

Example: Find the area of the triangle whose vertices are

$$A \quad (2, 3, -5)$$

$$B \quad (-2, -2, 0)$$

$$C \quad (3, 0, 6)$$

Method 1: Using vectors and cross product

Step 1: Select and identify 2 vectors that share the same initial or terminal point

$$\vec{BA} \quad (2, 3, -5) - (-2, -2, 0) \rightarrow \langle 4, 5, -5 \rangle = v$$

$$\vec{CA} \quad (2, 3, -5) - (3, 0, 6) \rightarrow \langle -1, 3, -11 \rangle = w$$

$$\text{Area} = \frac{1}{2} \| v \times w \|$$

Step 2: Find cross product

$$v \times w = \begin{vmatrix} i & j & k \\ 4 & 5 & -5 \\ -1 & 3 & -11 \end{vmatrix} = \begin{vmatrix} 5 & -5 \\ 3 & -11 \end{vmatrix} i - \begin{vmatrix} 4 & -5 \\ -1 & -11 \end{vmatrix} j + \begin{vmatrix} 4 & 5 \\ -1 & 3 \end{vmatrix} k = -40i - (-49j) + 17k = -40i + 49j + 17k$$

or  $\langle -40, 49, 17 \rangle$

Step 3: Insert into area formula...

$$\text{Area} = \frac{1}{2} \| v \times w \| = \frac{1}{2} \| \langle -40, 49, 17 \rangle \| = \frac{1}{2} \sqrt{4290} = \frac{1}{2} \cdot 65.5$$

approx. 32.75

Method 2: Using law of cosines, sines, and trig formulas

Step 1: Find lengths of sides (using distance formula)

$$\text{side } c \text{ (distance between A and B)} \quad \sqrt{(2 - (-2))^2 + (3 - (-2))^2 + (-5 - 0)^2}$$

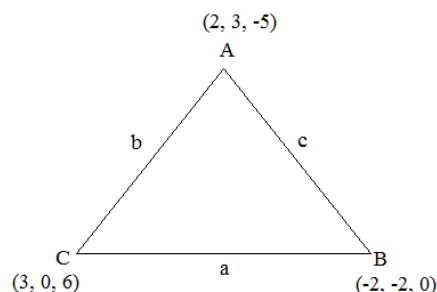
$$\sqrt{16 + 25 + 25} = \sqrt{66}$$

$$\text{side } a \text{ (distance between B and C)} \quad \sqrt{(-2 - 3)^2 + (-2 - 0)^2 + (0 - 6)^2}$$

$$\sqrt{25 + 4 + 36} = \sqrt{65}$$

$$\text{side } b \text{ (distance between C and A)} \quad \sqrt{(3 - 2)^2 + (0 - 3)^2 + (6 - (-5))^2}$$

$$\sqrt{1 + 9 + 121} = \sqrt{131}$$



Step 2: Find length of 3rd side using law of cosines

$$c^2 = a^2 + b^2 - 2ab(\cos C)$$

$$66 = 65 + 131 - 2(\sqrt{65})(\sqrt{131})\cos C$$

$$\frac{-130}{-2\sqrt{8515}} = \cos C \quad C = 45.22^\circ$$

$$\text{Area of triangle} = \frac{1}{2} ab \sin C$$

Step 3: Insert into area formula

$$\text{Area} = \frac{1}{2} \sqrt{65} \sqrt{131} \sin(45.22^\circ) = 32.75$$

Example: Find  $V \times U$ . then, verify that the result is orthogonal to both  $V$  and  $U$

$$U = \langle 3, 2, -8 \rangle$$

note:  $V \times U$  is NOT the same as  $U \times V$

$$V = \langle -1, 6, 7 \rangle$$

$$V \times U = \begin{vmatrix} i & j & k \\ -1 & 6 & 7 \\ 3 & 2 & -8 \end{vmatrix} = \begin{vmatrix} 6 & 7 \\ 2 & -8 \end{vmatrix} i - \begin{vmatrix} -1 & 7 \\ 3 & -8 \end{vmatrix} j + \begin{vmatrix} -1 & 6 \\ 3 & 2 \end{vmatrix} k$$

note: the second group, the j component is (-)

$$(-48 - 14)i - (8 - 21)j + (-2 - 18)k$$

$$\langle -62, 13, -20 \rangle$$

$$\langle -62, 13, -20 \rangle \cdot \langle 3, 2, -8 \rangle = -186 + 26 + 160 = 0 \checkmark$$

(since dot product equals zero, the vectors are orthogonal)

$$\langle -62, 13, -20 \rangle \cdot \langle -1, 6, 7 \rangle = 62 + 78 - 140 = 0 \checkmark$$

Example: Find equation of a plane that contains these points:  $(2, 3, -2)$   $(3, 4, 2)$   $(1, -1, 0)$

We need the normal vector and a point... (we have 3 points to choose from)

Step 1: Find 2 vectors

$$\begin{array}{l} A(2, 3, -2) \\ B(3, 4, 2) \end{array} \quad \overrightarrow{AB} \quad \langle 1, 1, 4 \rangle$$

$$\begin{array}{l} A(2, 3, -2) \\ C(1, -1, 0) \end{array} \quad \overrightarrow{AC} \quad \langle -1, -4, 2 \rangle$$

Step 2: Use the cross product to find the normal vector  
(the cross product is orthogonal to BOTH vectors)

$$\vec{N} = \overrightarrow{AB} \times \overrightarrow{AC} = \begin{vmatrix} i & j & k \\ 1 & 1 & 4 \\ -1 & -4 & 2 \end{vmatrix} = \begin{vmatrix} 1 & 4 \\ -4 & 2 \end{vmatrix} i - \begin{vmatrix} 1 & 4 \\ -1 & 2 \end{vmatrix} j + \begin{vmatrix} 1 & 1 \\ -1 & -4 \end{vmatrix} k = 18i - 6j - 3k$$

Step 3: Plug your point into the normal vector

$$A(2, 3, -2) \quad 18(2) - 6(3) - 3(-2) = 24 \quad 18x - 6y - 3z = 24$$

Step 4: Check the answer  
(substitute each point into the equation of the plane!)

$$A(2, 3, -2) \quad \text{Obviously, this one will work: } 18(2) - 6(3) - 3(-2) = 24 \checkmark$$

$$B(3, 4, 2) \quad 18(3) - 6(4) - 3(2) = 54 - 24 - 6 = 24 \checkmark$$

$$C(1, -1, 0) \quad 18(1) - 6(-1) - 3(0) = 18 + 6 - 0 = 24 \checkmark$$

Finding the equation of a plane (without using the cross product)

*Example:* Write the equation of the plane containing the points  $(-3, 5, -8)$   $(-2, 3, -4)$   $(6, 1, -3)$

Step 1: find equation of 2 lines/vectors

$$(-3, 5, -8) \text{ to } (-2, 3, -4) \text{ is } \langle 1, -2, 4 \rangle$$

$$(-3, 5, -8) \text{ to } (6, 1, -3) \text{ is } \langle 9, -4, 5 \rangle$$

Step 2: find the normal vector

Since the normal vector is perpendicular to each vector above, the dot product will be 0.

$$\text{Normal Vector } \langle a, b, c \rangle \text{ perpendicular to } \langle 1, -2, 4 \rangle \quad 1a + -2b + 4c = 0$$

$$\text{Normal Vector } \langle a, b, c \rangle \text{ perpendicular to } \langle 9, -4, 5 \rangle \quad 9a + -4b + 5c = 0$$

To find a, b, c, we'll solve the system of equations....

Since there are 2 equations and 3 variables, there are multiple answers...  
We'll pick one:

$$\begin{array}{rcl} \text{let } a = 1: & 1 + -2b + 4c = 0 & \Rightarrow -2b + 4c = -1 & 4b - 8c = 2 \\ & 9 + -4b + 5c = 0 & \Rightarrow -4b + 5c = -9 & \underline{-4b + 5c = -9} \\ & & & -3c = -7 & c = 7/3 \end{array}$$

$$1 + -2b + 4(7/3) = 0$$

$$-2b = -31/3 \quad b = 31/6$$

The normal vector is  $\langle 1, 31/6, 7/3 \rangle$

Or,  $\langle 6, 31, 14 \rangle$

To check our work; we'll take the dot product of the normal vector to each vector

$$\langle 1, -2, 4 \rangle \cdot \langle 6, 31, 14 \rangle = 6 - 62 + 56 = 0 \quad \checkmark$$

$$\langle 9, -4, 5 \rangle \cdot \langle 6, 31, 14 \rangle = 54 - 124 + 70 = 0 \quad \checkmark$$

Step 3: Apply the equation of a plane....

Using the point  $(-3, 5, -8)$ ....

$$6(x + 3) + 31(y - 5) + 14(z + 8) = 0$$

or

$$6x + 31y + 14z = 25$$

To check our work, we'll plug in all 3 points

$(-3, 5, -8)$  We used this point, so it works..

$$(-2, 3, -4) \quad 6(-2) + 31(3) + 14(-4) = -12 + 93 - 56 = 25 \quad \checkmark$$

$$(6, 1, -3) \quad 6(6) + 31(1) + 14(-3) = 36 + 31 - 42 = 25 \quad \checkmark$$

Finding the equation of a plane: 2 methods

Example: Find the equation of a plane containing the points (2, 1, 3) (1, 4, -2) and (-1, 3, 5)

Method 1: Using vectors, normal, and cross product

Step 1: Find identify 2 vectors from one of the points...

We'll use (2, 1, 3)

vector u from (2, 1, 3) to (1, 4, -2)

$$\langle -1, 3, -5 \rangle$$

vector v from (2, 1, 3) to (-1, 3, 5)

$$\langle -3, 2, 2 \rangle$$

Step 2: Determine the normal vector by taking cross product

$$\mathbf{u} \times \mathbf{v} = \begin{vmatrix} \mathbf{i} & \mathbf{j} & \mathbf{k} \\ -1 & 3 & -5 \\ -3 & 2 & 2 \end{vmatrix} = \mathbf{i} \begin{vmatrix} 3 & -5 \\ 2 & 2 \end{vmatrix} - \mathbf{j} \begin{vmatrix} -1 & -5 \\ -3 & 2 \end{vmatrix} + \mathbf{k} \begin{vmatrix} -1 & 3 \\ -3 & 2 \end{vmatrix}$$

$$16\mathbf{i} + 17\mathbf{j} + 7\mathbf{k}$$

Note: since this is a normal vector, it should be orthogonal to vectors u and v!

To check, we'll take the dot product...

$$\langle 16, 17, 7 \rangle \cdot \langle -3, 2, 2 \rangle = -48 + 34 + 14 = 0 \quad \checkmark$$

$$\langle 16, 17, 7 \rangle \cdot \langle -1, 3, -5 \rangle = -16 + 51 - 35 = 0 \quad \checkmark$$

Step 3: Plug in the chosen point into the normal vector...

$$(2, 1, 3) \quad 16\mathbf{i} + 17\mathbf{j} + 7\mathbf{k}$$

$$16(x - 2) + 17(y - 1) + 7(z - 3) = 0$$

$$16x + 17y + 7z = 70$$

Method 2: Using the general form of a plane and system of equations

Step 1: Substitute each point into the equation of a plane

$$Ax + By + Cz + D = 0$$

$$(2, 1, 3) \implies 2A + 1B + 3C + D = 0$$

$$(1, 4, -2) \implies 1A + 4B + (-2)C + D = 0$$

$$(-1, 3, 5) \implies -1A + 3B + 5C + D = 0$$

Step 2: Solve the system of equations

$$A = \frac{-8}{35}D$$

$$D = D$$

$$B = \frac{-17}{70}D$$

$$C = \frac{-1}{10}D$$

Step 3: Clean up the equation

To get rid of the fractions, we'll let D = 70

$$A = -16 \quad B = -17 \quad C = -7 \quad D = 70$$

$$-16x - 17y - 7z + 70 = 0$$

$$16x + 17y + 7z = 70$$

Note: To check our answer, we can plug in each point!

$$(2, 1, 3) \implies 16(2) + 17(1) + 7(3) = 32 + 17 + 21 = 70 \quad \checkmark$$

$$(1, 4, -2) \implies 16(1) + 17(4) + 7(-2) = 16 + 68 - 14 = 70 \quad \checkmark$$

$$(-1, 3, 5) \implies 16(-1) + 17(3) + 7(5) = -16 + 51 + 35 = 70 \quad \checkmark$$

Example: Find the area of parallelogram ABCD whose vertices are

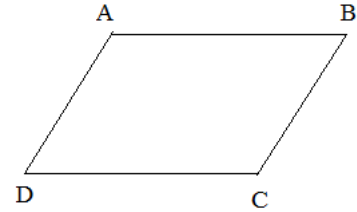
$$A (5, -6, 3)$$

$$B (-2, -9, 8)$$

$$C (2, -5, 5)$$

$$D (9, -2, 0)$$

Step 1: Sketch a diagram



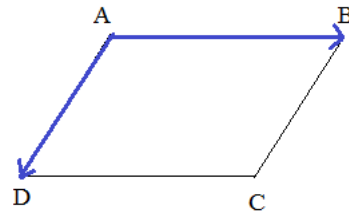
Step 2: Find 2 vectors that share a common vertex...

$$\vec{AB} = \langle (-2 - 5), (-9 - (-6)), (8 - 3) \rangle$$

$$\langle -7, -3, 5 \rangle$$

$$\vec{AD} = \langle (9 - 5), (-2 - (-6)), (0 - 3) \rangle$$

$$\langle 4, 4, -3 \rangle$$



Step 3: Use Cross product

$$\vec{AB} \times \vec{AD} = \begin{vmatrix} \mathbf{i} & \mathbf{j} & \mathbf{k} \\ -7 & -3 & 5 \\ 4 & 4 & -3 \end{vmatrix} = \begin{vmatrix} -3 & 5 \\ 4 & -3 \end{vmatrix} \mathbf{i} - \begin{vmatrix} -7 & 5 \\ 4 & -3 \end{vmatrix} \mathbf{j} + \begin{vmatrix} -7 & -3 \\ 4 & 4 \end{vmatrix} \mathbf{k}$$

$$-11\mathbf{i} - 1\mathbf{j} + -16\mathbf{k} \quad \langle -11, -1, -16 \rangle$$

Step 4: Use Area formula for Parallelogram...

$$\left\| \vec{AB} \times \vec{AD} \right\| = \left\| \langle -11, -1, -16 \rangle \right\|$$

$$\text{Area of parallelogram} = \| \mathbf{u} \times \mathbf{v} \|$$

$$\sqrt{121 + 1 + 256} = \sqrt{378} = 3\sqrt{42} = 19.44$$



### 3-D vectors and force

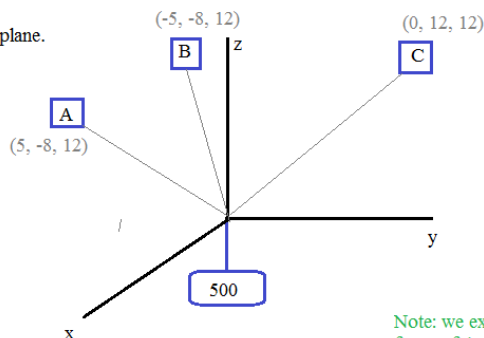
*Example:* 3 pulleys are holding a 500 pound weight in place.  
The position of the pulleys can be mapped onto a 3-d coordinate plane.

Pulley A (5, -8, 12)

Pulley B (-5, -8, 12)

Pulley C (0, 12, 12)

Identify the force each pulley is exerting...



Note: we expect the force of A and B to be the same, since their angles to the weight are the same!

To solve, we must remember that a vector consists of a) direction and b) length..  
THEN, we must account for the force in the magnitude of the vector!

First, let's find the unit vector of each pulley:

$$A: \frac{\langle 5, -8, 12 \rangle}{\sqrt{25 + 64 + 144}}$$

$$B: \frac{\langle -5, -8, 12 \rangle}{\sqrt{25 + 64 + 144}}$$

$$C: \frac{\langle 0, 12, 12 \rangle}{\sqrt{0 + 144 + 144}}$$

Since each pulley extends from the origin (0, 0, 0), the position is identical to the vector..

unit vector A:

unit vector B:

unit vector C:

$$\left\langle \frac{5}{\sqrt{233}}, \frac{-8}{\sqrt{233}}, \frac{12}{\sqrt{233}} \right\rangle$$

$$\left\langle \frac{-5}{\sqrt{233}}, \frac{-8}{\sqrt{233}}, \frac{12}{\sqrt{233}} \right\rangle$$

$$\left\langle \frac{0}{12\sqrt{2}}, \frac{12}{12\sqrt{2}}, \frac{12}{12\sqrt{2}} \right\rangle$$

Now, that we have the direction, we can add the force (magnitude) of each pulley!

$$\|A\| \left\langle \frac{5}{\sqrt{233}}, \frac{-8}{\sqrt{233}}, \frac{12}{\sqrt{233}} \right\rangle + \|B\| \left\langle \frac{-5}{\sqrt{233}}, \frac{-8}{\sqrt{233}}, \frac{12}{\sqrt{233}} \right\rangle + \|C\| \left\langle \frac{0}{12\sqrt{2}}, \frac{12}{12\sqrt{2}}, \frac{12}{12\sqrt{2}} \right\rangle$$

and, that total must equal the force of the 500 pound weight..  $\langle 0, 0, 500 \rangle$

$$\frac{5}{\sqrt{233}} \|A\| + \frac{-5}{\sqrt{233}} \|B\| + \frac{0}{12\sqrt{2}} \|C\| = 0$$

The i vector components (x-direction)

Note: the vector is  $\langle 0, 0, -500 \rangle$ , BUT we want the sum of all 4 vectors to equal 0....  
Therefore, the opposing weight is expressed as an opposite...

$$\frac{-8}{\sqrt{233}} \|A\| + \frac{-8}{\sqrt{233}} \|B\| + \frac{12}{12\sqrt{2}} \|C\| = 0$$

The j vector components (y-direction)

$$\frac{12}{\sqrt{233}} \|A\| + \frac{12}{\sqrt{233}} \|B\| + \frac{12}{12\sqrt{2}} \|C\| = 500$$

The k vector components (z-direction)

Three linear equations, with 3 variables...

$$\|A\| = 190.8 \quad \|B\| = 190.8 \quad \|C\| = 282.8$$

$$\frac{25}{2} \sqrt{233} \quad \frac{25}{2} \sqrt{233} \quad 200\sqrt{2}$$

The answer seems reasonable..

If pulleys A, B, and C were directly above the weight, the force would be 500...  
But, since they are pulling from an angle, the collective force required is greater than 500...

### Distance between two planes

Example: find the distance between the planes

$$3x + 5y - z = 11$$

$$3(x-2) + 5(y+1) - 1(z+7) = 0$$

Step 1: First, we check that the planes are parallel (and don't intersect).  
Since the normal vectors are parallel, the planes are parallel.

Step 2: Pick points from each plane and connect them,  
forming a vector  $u$

We randomly pick a point that works in the first plane:  $(1, 1, -3)$

and, we'll pick the shown point in the second plane:  $(2, -1, -7)$

$$\text{vector } u = \langle -1, 2, 4 \rangle$$

Step 3: Identify the normal vector  $n$  of each plane

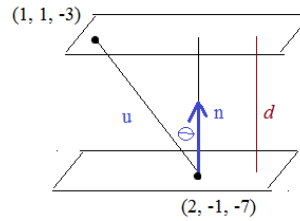
The normal vector of each plane is  $\langle a, b, c \rangle$   $n = \langle 3, 5, -1 \rangle$

Step 4: Apply the formula that "projects the vector  $u$   
onto the normal vector  $n$ "

$$|u \cdot n| = |(-3) + 10 + (-4)| = 3$$

$$|n| = \sqrt{3^2 + 5^2 + (-1)^2} = \sqrt{35}$$

$$\text{distance} = \frac{3}{\sqrt{35}}$$



note:

$$\cos \Theta = \frac{d}{|u|}$$

$$\cos \Theta = \frac{u \cdot n}{|u| \cdot |n|}$$

$$\text{distance } d = \frac{|u \cdot n|}{|n|}$$

where  $u$  is a vector connecting the planes  
and  $n$  is the normal vector of the parallel planes

### Distance between two lines

Example: find the distance between the lines

$$x = 3t + 5$$

$$x = 3s + 1$$

$$y = -t + 2$$

and

$$y = -s + 8$$

$$z = 2t - 3$$

$$z = 2s$$

Step 1: check that the planes have no intersection  
(after all, if they intersect, then the distance is zero!)

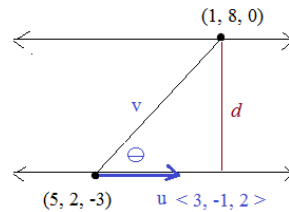
This is easily checked, because the lines are  
parallel (and not skew)...

They each have same direction vector  $\langle 3, -1, 2 \rangle$  ✓

Step 2: pick a point from each line and create a vector ' $v$ '  
connecting the points

We know  $(5, 2, -3)$  is on the first line;  
and,  $(1, 8, 0)$  is on the second line

$$\text{vector } v = \langle -4, 6, 3 \rangle$$



note:

$$\sin \Theta = \frac{d}{|v|}$$

$$\sin \Theta = \frac{|u \times v|}{|u| \cdot |v|}$$

Step 4: apply the formula that "projects the drawn vector ' $v$ ' in  
the direction of the vector orthogonal to the lines"

$$\text{distance } d = \frac{|u \times v|}{|u|}$$

where  $u$  is the direction of a given line  
and  $v$  is the vector connecting 2 points

Step 3: find the vector orthogonal to the lines and the  
created vector

$$u \times v = \begin{vmatrix} i & j & k \\ 3 & -1 & 2 \\ -4 & 6 & 3 \end{vmatrix} = \begin{vmatrix} -1 & 2 \\ 6 & 3 \end{vmatrix} i - \begin{vmatrix} 3 & 2 \\ -4 & 3 \end{vmatrix} j + \begin{vmatrix} 3 & -1 \\ -4 & 6 \end{vmatrix} k$$

$$\langle -15, -17, 14 \rangle$$

$$|u \times v| = \text{magnitude: } \sqrt{(-15)^2 + (-17)^2 + (14)^2} = \sqrt{710}$$

$$|u| = \sqrt{(3)^2 + (-1)^2 + (2)^2} = \sqrt{14}$$

$$\text{distance} = \frac{\sqrt{710}}{\sqrt{14}} = 7.12$$

## Distance of a point to a plane

*Example:* Find the distance from  $(2, -1, 5)$  to  $3x + 2y - 2z - 7 = 0$

Method 1: using normal vector and vector from point to random point in the plane

Step 1: Identify the normal vector  $n$

From the plane  $3x + 2y - 2z - 7 = 0$ ,  
we know the normal vector  $n$   
is

$$\langle 3, 2, -2 \rangle$$

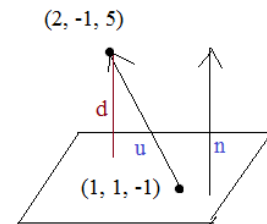
Step 2: choose a vector connecting the point to a place in the plane

the point is  $(2, -1, 5)$

and, we can use  $(1, 1, -1)$  from the plane

because  $3(1) + 2(1) - 2(-1) - 7 = 0$  ✓

The vector  $u$  from  $(1, 1, -1)$  to  $(2, -1, 5)$  is  $\langle 1, -2, 6 \rangle$



Step 3: Project the vector  $u$  in the direction of  $n$  to find the distance....

$$\text{distance } d = \frac{|u \cdot n|}{|n|}$$

where  $u$  is a vector connecting the planes  
and  $n$  is the normal vector of the parallel planes

$$d = \frac{|\langle 1, -2, 6 \rangle \cdot \langle 3, 2, -2 \rangle|}{\sqrt{3^2 + 2^2 + (-2)^2}} = \frac{13}{\sqrt{17}}$$

Method 2: Use distance from a point to a plane formula

The distance  $d$  from point  $P_1(x_1, y_1, z_1)$

to plane  $Ax + By + Cz + D = 0$  is

$$d = \frac{|Ax_1 + By_1 + Cz_1 + D|}{\sqrt{A^2 + B^2 + C^2}}$$

Point  $(x, y, z) \rightarrow (2, -1, 5)$

coefficients  $A, B, C, D$  from plane  $\rightarrow 3x + 2y - 2z - 7 = 0$

$$d = \frac{|3(2) + 2(-1) - 2(5) - 7|}{\sqrt{3^2 + 2^2 + (-2)^2}} = \frac{|-13|}{\sqrt{17}} = \frac{13}{\sqrt{17}}$$

Working with parametric lines and vectors: distance between lines

Example: Find the distance between the following lines....

$$L_1 \begin{cases} x = 4 - 2t \\ y = 5 + 3t \\ z = -1 + t \end{cases} \quad L_2 \begin{cases} x = 5 - 2s \\ y = 1 + 3s \\ z = 2 + s \end{cases}$$

Since the direction vectors are the same,  $\langle -2, 3, 1 \rangle$ , these lines are parallel!

We need to find SOME POINT P that is closest to SOME point Q

$$L_1 = 4 - 2t, 5 + 3t, -1 + t$$

$$L_2 = 5 - 2s, 1 + 3s, 2 + s$$

$$\vec{PQ} = \langle 1 - 2s + 2t, -4 + 3s - 3t, 3 + s - t \rangle$$

$\vec{PQ}$  is orthogonal to both lines...

So,

$$\vec{PQ} \cdot L_1 = 0$$

$$\vec{PQ} \cdot \langle -2, 3, 1 \rangle = 0$$

$$\vec{PQ} \cdot L_2 = 0$$

$$\vec{PQ} \cdot \langle -2, 3, 1 \rangle = 0$$

Both equations, since they are parallel, would be...

$$\langle 1 - 2s + 2t, -4 + 3s - 3t, 3 + s - t \rangle \cdot \langle -2, 3, 1 \rangle = 0$$

$$-2 + 4s - 4t + -12 + 9s - 9t + 3 + s - t = 0$$

$$-11 + 14s - 14t = 0$$

$$\Rightarrow 14s - 14t = 11 \quad \Leftarrow$$

Now, we'll choose 2 points:

Let  $s = 11/14$  and  $t = 0$  because  $14(11/14) - 14(0) = 11$

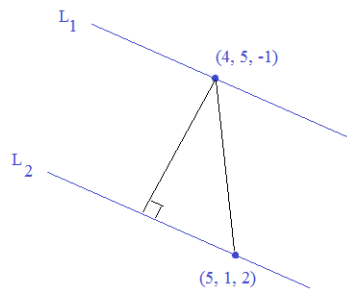
$$L_1 \begin{cases} x = 4 - 2t \\ y = 5 + 3t \\ z = -1 + t \end{cases} \quad L_2 \begin{cases} x = 5 - 2s \\ y = 1 + 3s \\ z = 2 + s \end{cases}$$

distance between these two points:

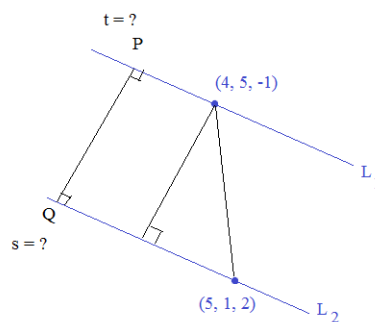
$$t = 0: (4, 5, -1)$$

$$s = 11/14: (48/14, 47/14, 39/14)$$

$$\text{distance} = \sqrt{(8/14)^2 + (23/14)^2 + (53/14)^2} = \sqrt{243/14} \quad \checkmark$$



Possible sketch showing distance between points  $t=0$  and  $s=0$



Here is a formula that applies the above structure:

$$\text{distance } d = \frac{|\mathbf{u} \times \mathbf{v}|}{|\mathbf{u}|}$$

where  $\mathbf{u}$  is the direction of a given line and  $\mathbf{v}$  is the vector connecting 2 points

$$\mathbf{u} = \langle -2, 3, 1 \rangle$$

$$\mathbf{v} = \langle 1, -4, 3 \rangle$$

$$\mathbf{u} \times \mathbf{v} = \langle 13, 7, 5 \rangle$$

$$d = \frac{\sqrt{243}}{\sqrt{14}} \quad \checkmark$$

Ultra-Marathon

100K Challenge



"Red e..  
Set..  
GO!"



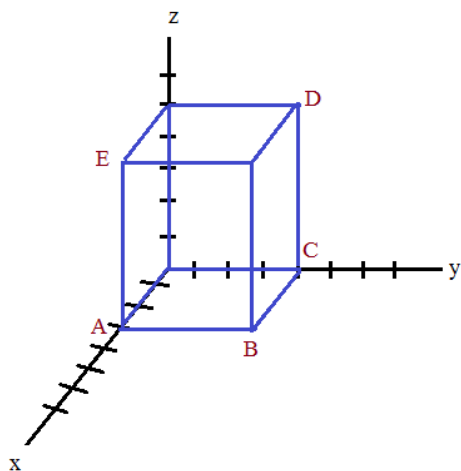
Testing the limits of endurance,  
these math figures will run on and on...

LanceAF #87 5-24-13  
[www.mathplane.com](http://www.mathplane.com)

Practice Quiz→

1) Three-Dimensional Coordinates

Three-Dimensional Space Quiz



Identify the coordinates of the following points:

A:

B:

C:

D:

E:

Determine the midpoints of:

A and B

D and C

E and C

E and B

Find the distance between:

A and B

A and E

A and D

2) Spheres

A) Find the center and radius of the following sphere:

$$x^2 + y^2 + z^2 - 8y + 2z = 8$$

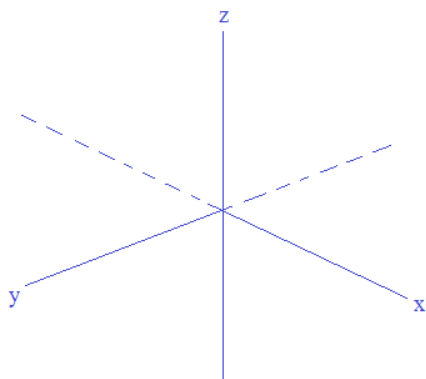
Identify any 3 points that lie on the sphere:

Is the origin (0, 0, 0) inside the sphere?

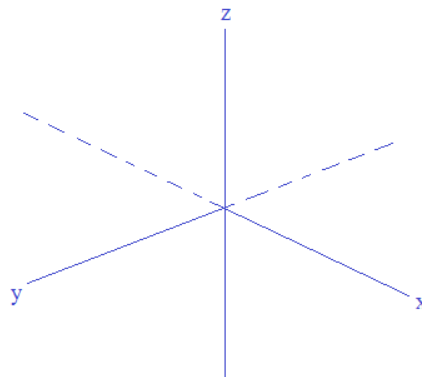
3) Planes

A) Find the intercepts and sketch the following planes:

1)  $x - 3y + 2z = 6$



2)  $x + 2y + 3z = 6$



B) Find the equation of a plane that contains these points:  $(1, 2, 3)$   $(0, -4, -1)$   $(6, 1, 5)$

## 4) Intersections and the 'trace'

A) The center of a sphere is  $(2, 4, 3)$ .

If the radius is 3, describe the intersection with the

1)  $xy$ -plane2)  $xz$ -plane3)  $yz$ -plane

B)  $(x - 9)^2 + (y + 6)^2 + (z - 11)^2 = r^2$

a) Find possible values of  $r$  that have NO trace in the  $xy$ ,  $yz$ , and  $xz$  planes..b) Find possible values of  $r$  where the sphere intersects ONLY the  $xz$  plane..c) Describe the traces if  $r = 7$ 1)  $xz$  trace2)  $yz$  trace3)  $xy$  trace



## 5) 3-Dimensional Vectors

A) What is  $u \cdot v$  ?

$$u = 3i - 7j$$

$$v = 8j + 9k$$

B) What is  $v \times u$  ?C) Vector  $w$  lies on the  $yz$ -plane.It has a magnitude of 6 and makes a 45-degree angle with the negative  $y$ -axis.What is vector  $w$ ?D) Vector  $N$  lies on the  $xz$ -plane. The magnitude is 10.If it's a 60-degree angle from the  $z$ -axis, what is the vector?

6) Vectors and Parametric Concepts

A) Write the parametric equation of a line that crosses the z-axis at  $z = 6$  and crosses the xy-plane when  $x = 2$  and  $y = 5$ .

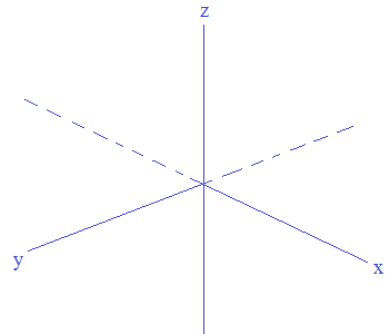
B) Are the vectors  $\langle 2, 3 \rangle$  and  $\langle -4, -9 \rangle$  parallel, perpendicular, or neither?

C) Find 2 *unit vectors* that are perpendicular to  $j + 3k$  and  $i - 2j + 4k$ .

D) What is the angle between vectors  $\vec{v}$  and  $\vec{w}$ ?

$$\vec{v} = \langle 1, 2, -5 \rangle$$

$$\vec{w} = \langle 0, 3, 3 \rangle$$



1) Given the points A (3, 4, -1) and B (7, -6, 5)

Find

a) the midpoint

b) the distance between points

2) Find the intersection of the 2 lines

$$l \begin{cases} x = 4t + 1 \\ y = t + 3 \\ z = -2t + 8 \end{cases} \quad m \begin{cases} x = 5s - 10 \\ y = -3s + 13 \\ z = 2s \end{cases}$$

3) What is the intersection of the planes

$$3x + 5y + z + 6 = 0$$

$$2x - y + 3z + 1 = 0$$

4) Find the distance from the point to the line

$$\begin{aligned} \text{line: } x &= 3t + 1 & \text{point: } (4, 6, 7) \\ y &= t - 2 \\ z &= 2t + 5 \end{aligned}$$


5) Find the distance between the lines.

$$\begin{aligned} x &= 3t + 1 & x &= 3s + 3 \\ y &= t - 2 & y &= s + 5 \\ z &= 2t + 5 & z &= 2s + 1 \end{aligned}$$

6) What is the equation of the plane containing the points

$$(1, 4, -2) \quad (5, 0, 2) \quad \text{and} \quad (3, -1, 3)$$

*A relationship of significant magnitude: Dot and Norm*



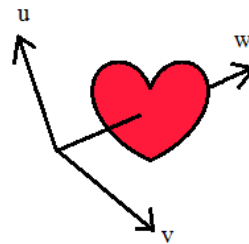
(Their embarrassed kids, *ike*, *jay*, and *kay*, were nowhere to be found...)

LanceAF #177 2-14-15  
mathplane.com

Math  
Romance  
II

*Looking for love?*

(advertisement)



mathmatch.com

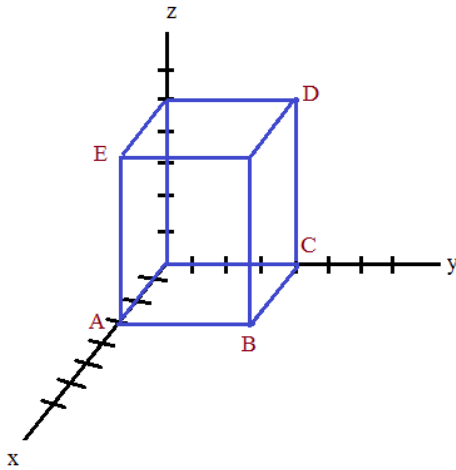
*on-line dating  
that gets resultants....*

Solutions ->

1) Three-Dimensional Coordinates

SOLUTIONS

Three-Dimensional Space Quiz



Identify the coordinates of the following points:

- A: (3, 0, 0)
- B: (3, 4, 0)
- C: (0, 4, 0)
- D: (0, 4, 5)
- E: (3, 0, 5)

Determine the midpoints of:

A and B  $x = \frac{3+3}{2}$   $y = \frac{0+4}{2}$   $z = \frac{0+0}{2}$  (3, 2, 0)

D and C  $x = \frac{0+0}{2}$   $y = \frac{4+4}{2}$   $z = \frac{5+0}{2}$  (0, 4, 2.5)

E and C (1.5, 2, 2.5) or (3/2, 2, 5/2)

E and B (3, 2, 2.5)

Find the distance between:

A and B  $\sqrt{(3-3)^2 + (4-0)^2 + (0-0)^2} = 4$

A and E  $\sqrt{(3-3)^2 + (0-0)^2 + (5-0)^2} = 5$

A and D  $\sqrt{(3-0)^2 + (0-4)^2 + (0-5)^2} = \sqrt{50} = 5\sqrt{2}$

NOTE: the similarity of the formulas for circles in a plane and spheres in space!

2) Spheres

A) Find the center and radius of the following sphere:

$$x^2 + y^2 + z^2 - 8y + 2z = 8$$

Complete the square to put general equation into standard form...

$$x^2 + y^2 - 8y + 16 + z^2 + 2z + 1 = 8 + 16 + 1$$

$$x^2 + (y - 4)^2 + (z + 1)^2 = 25$$

The center is (0, 4, -1) and the radius is 5

Identify any 3 points that lie on the sphere:

Three easy points to find are any intercepts: If y and z are 0,  $x^2 + (0)^2 + (0)^2 - 8(0) + 2(0) = 8$

$(\sqrt{8}, 0, 0)$   $(-\sqrt{8}, 0, 0)$

If x and y are 0,  $(0)^2 + (0)^2 + z^2 - 8(0) + 2z = 8$

$$z^2 + 2z = 8$$

$$(z + 4)(z - 2) = 0$$

(0, 0, 2) (0, 0, -4)

Is the origin (0, 0, 0) inside the sphere?

Find radius --- that is the length from the center to the sphere...  
Then, find distance from origin to point on the sphere..  
If distance < radius, then origin is inside the sphere!

distance between origin and center of the sphere:

$$\sqrt{(0-0)^2 + (4-0)^2 + (-1-0)^2} = \sqrt{17}$$

radius = 5

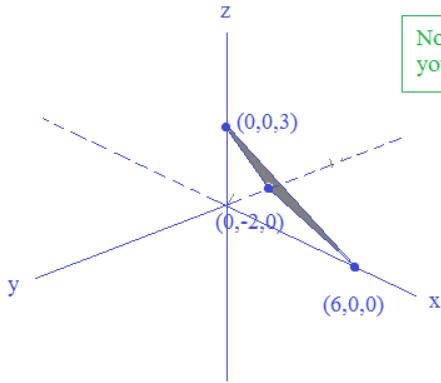
The origin is inside the sphere!

3) Planes

SOLUTIONS

A) Find the intercepts and sketch the following planes:

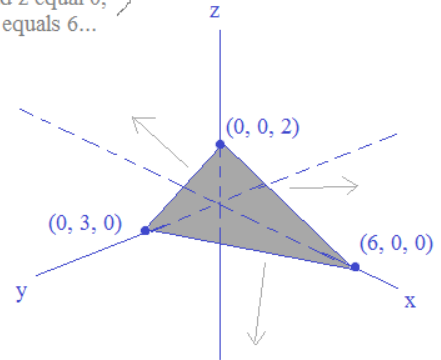
1)  $x - 3y + 2z = 6$       x-intercept (6, 0, 0)    y-intercept (0, -2, 0)    z-intercept (0, 0, 3)



Note: Once you have 3 points, you can sketch the plane!

2)  $x + 2y + 3z = 6$       (6, 0, 0)    (0, 3, 0)    (0, 0, 2)

If y and z equal 0, then x equals 6...



A                      B                      C

B) Find the equation of a plane that contains these points: (1, 2, 3)    (0, -4, -1)    (6, 1, 5)

We need the normal vector and a point... (we have 3 points to choose from)

Step 1: Find 2 vectors

$$\vec{AB} = \langle 0 - 1, -4 - 2, -1 - 3 \rangle = \langle -1, -6, -4 \rangle$$

$$\vec{AC} = \langle 6 - 1, 1 - 2, 5 - 3 \rangle = \langle 5, -1, 2 \rangle$$

Step 2: Use the cross product to find the normal vector  
(the cross product is orthogonal to BOTH vectors)

$$\vec{N} = \vec{AB} \times \vec{AC} = \begin{vmatrix} \mathbf{i} & \mathbf{j} & \mathbf{k} \\ -1 & -6 & -4 \\ 5 & -1 & 2 \end{vmatrix} = \begin{vmatrix} -6 & -4 \\ -1 & 2 \end{vmatrix} \mathbf{i} - \begin{vmatrix} -1 & -4 \\ 5 & 2 \end{vmatrix} \mathbf{j} + \begin{vmatrix} -1 & -6 \\ 5 & -1 \end{vmatrix} \mathbf{k} = -16\mathbf{i} - 18\mathbf{j} + 31\mathbf{k}$$

Step 3: Plug your point into the normal vector

A(1, 2, 3)       $-16(1) - 18(2) + 31(3) = 41$

$-16x - 18y + 31z = 41$

To check: Does (0, -4, -1) lie in the plane?

$$-16(0) - 18(-4) + 31(-1) = 41$$

$$0 - (-72) - 31 = 41$$

$$41 = 41 \quad \checkmark$$

Does (6, 1, 5) lie in the plane?

$$-16(6) - 18(1) + 31(5) = 41$$

$$-96 - 18 + 155 = 41$$

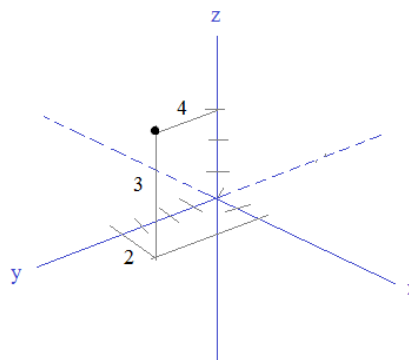
$$41 = 41 \quad \checkmark$$

4) Intersections and the 'trace'

SOLUTIONS

A) The center of a sphere is (2, 4, 3).  
If the radius is 3, describe the intersection with the

- 1) xy-plane **point** (the sphere will touch (2, 4, 0) in the xy-plane)
- 2) xz-plane **none** since the center is 4 units away from the xz-plane, a radius of 3 units will not reach....
- 3) yz-plane **circle**



B)  $(x - 9)^2 + (y + 6)^2 + (z - 11)^2 = r^2$

a) Find possible values of r that have NO trace in the xy, yz, and xz planes..

Sphere must not intersect either plane...  
Therefore, its radius must be less than all x, y, and z points...

$$0 < r < 6$$

(also, r must be positive length)

b) Find possible values of r where the sphere intersects ONLY the xz plane..

$$6 \leq r < 9$$

must be long enough to intersect xz plane... BUT must be short enough not to intersect the other planes...

c) Describe the traces if r = 7

1) xz trace

for xz trace, y = 0

$$(x - 9)^2 + (0 + 6)^2 + (z - 11)^2 = 7^2$$

$$(x - 9)^2 + 36 + (z - 11)^2 = 49$$

$$(x - 9)^2 + (z - 11)^2 = 13$$

a circle with center (9, 0, 11) and radius  $\sqrt{13}$

2) yz trace

**NONE** (if the radius is 7, then the sphere won't intersect the yz plane)

$$(0 - 9)^2 + (y + 6)^2 + (z - 11)^2 = 7^2$$

$$(y + 6)^2 + (z - 11)^2 = -32 \quad \text{radius cannot be negative}$$

3) xy trace

**NONE** (if the radius is 7, the sphere will not reach the xy plane)

$$(x - 9)^2 + (y + 6)^2 + (0 - 11)^2 = 7^2$$

(notice, the 'z distance' is greater than the radius)



5) 3-Dimensional Vectors

SOLUTIONS

Three-Dimensional Space Quiz

u = 3i - 7j  
v = 8j + 9k

A) What is  $u \cdot v$  ?

$$\langle 3, -7, 0 \rangle \cdot \langle 0, 8, 9 \rangle = 3 \cdot 0 + (-7) \cdot 8 + 0 \cdot 9 = 0 - 56 + 0 = -56$$

B) What is  $v \times u$  ?

note:  $v \times u$  is not equal to  $u \times v$ !

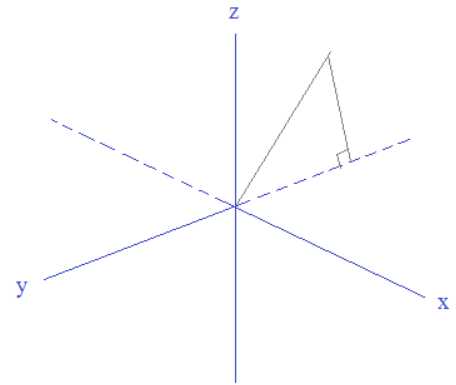
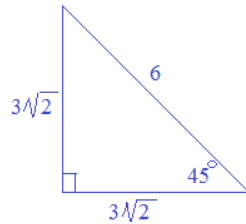
$$\begin{vmatrix} i & j & k \\ 0 & 8 & 9 \\ 3 & -7 & 0 \end{vmatrix} = \begin{vmatrix} 8 & 9 \\ -7 & 0 \end{vmatrix} i - \begin{vmatrix} 0 & 9 \\ 3 & 0 \end{vmatrix} j + \begin{vmatrix} 0 & 8 \\ 3 & -7 \end{vmatrix} k = 63i + 27j - 24k$$

negative

C) Vector  $w$  lies on the  $yz$ -plane. It has a magnitude of 6 and makes a 45-degree angle with the negative  $y$ -axis.

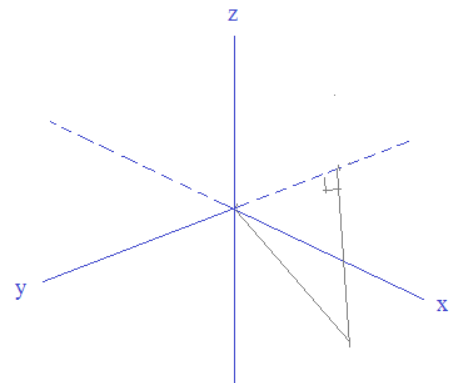
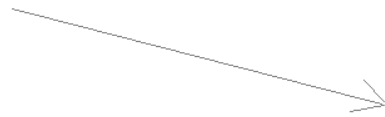
What is vector  $w$ ?

$$\langle 0, -3\sqrt{2}, 3\sqrt{2} \rangle$$



or,

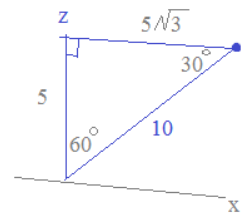
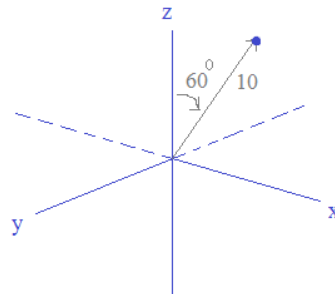
$$\langle 0, -3\sqrt{2}, -3\sqrt{2} \rangle$$



D) Vector  $N$  lies on the  $xz$ -plane. The magnitude is 10. If it's a 60-degree angle from the  $z$ -axis, what is the vector?

$$\langle 5\sqrt{3}, 0, 5 \rangle$$

or  $\langle -5\sqrt{3}, 0, 5 \rangle$



6) Vectors and Parametric Concepts

SOLUTIONS

A) Write the parametric equation of a line that crosses the z-axis at  $z = 6$  and crosses the xy-plane when  $x = 2$  and  $y = 5$ .

Since the line crosses the z-axis at  $z = 6$ , we know  $(0, 0, 6)$  is a point on the line...

And, since it crosses the xy-plane when  $x = 2$  and  $y = 5$ , we know  $(2, 5, 0)$  is a point on the line..

The direction of the line:  $(2, 5, 0) - (0, 0, 6) = \langle 2, 5, -6 \rangle$   
(slope)

Then, using a point on the line,  $(2, 5, 0)$ , the parametric equation is

$$\begin{aligned} x &= 2 + 2t \\ y &= 5 + 5t \\ z &= -6t \end{aligned}$$

Quick check: if  $t = 0$ , then  $(x, y, z) = (2, 5, 0)$  ✓

and, if  $t = -1$ , then  $(x, y, z) = (0, 0, 6)$  ✓

Both points fit in the parametric equation, and therefore lie on the line..

B) Are the vectors  $\langle 2, 3 \rangle$  and  $\langle -4, -9 \rangle$  parallel, perpendicular, or neither?

If the vectors are perpendicular, then the dot product equals zero..

Dot product:  $(2 \times -4) + (3 \times -9) = -35$  Not perpendicular

If the vectors have the same "slope", direction, then they are parallel.. (i.e. do they differ by a scalar value?)

$\frac{3}{2} \neq \frac{-9}{-4}$  Not parallel There is no value of  $n$  where  $n \langle 2, 3 \rangle = \langle -4, -9 \rangle$

The vectors are neither....

C) Find 2 unit vectors that are perpendicular to  $j + 3k$  and  $i - 2j + 4k$ .

To find perpendicular vector(s) or normal(s), use the cross product...

$$\begin{vmatrix} i & j & k \\ 0 & 1 & 3 \\ 1 & -2 & 4 \end{vmatrix} = i \begin{vmatrix} 1 & 3 \\ -2 & 4 \end{vmatrix} - j \begin{vmatrix} 0 & 3 \\ 1 & 4 \end{vmatrix} + k \begin{vmatrix} 0 & 1 \\ 1 & -2 \end{vmatrix} = 10i + 3j - 1k$$

To check: (the dot product of perpendicular/orthogonal vectors is 0)

$\langle 0, 1, 3 \rangle \cdot \langle 10, 3, -1 \rangle = 0 + 3 - 3 = 0$  ✓

$\langle 1, -2, 4 \rangle \cdot \langle 10, 3, -1 \rangle = 10 - 6 - 4 = 0$  ✓

Then, to find the unit vector...

the length of  $\langle 10, 3, -1 \rangle = \sqrt{10^2 + 3^2 + (-1)^2} = \sqrt{110}$

so, unit vector is

$$\frac{1}{\sqrt{110}} \langle 10i + 3j - 1k \rangle = \frac{\sqrt{110}}{11} i + \frac{3\sqrt{110}}{110} j - \frac{\sqrt{110}}{110} k$$

Note: the unit vector has a length of 1

then, another unit vector that is perpendicular has the same length but is going the opposite direction....

$$-\frac{\sqrt{110}}{11} i - \frac{3\sqrt{110}}{110} j + \frac{\sqrt{110}}{110} k$$

D) What is the angle between vectors  $\vec{v}$  and  $\vec{w}$ ?

$\vec{v} = \langle 1, 2, -5 \rangle$

$\vec{v} \cdot \vec{w} = (1 \times 0) + (2 \times 3) + (-5 \times 3) = -9$

$\vec{w} = \langle 0, 3, 3 \rangle$

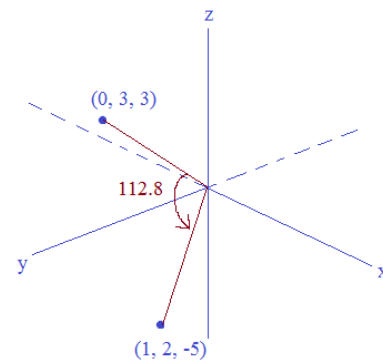
$|\vec{v}| = \sqrt{1^2 + 2^2 + (-5)^2} = \sqrt{30}$

$|\vec{w}| = \sqrt{0^2 + 3^2 + 3^2} = 3\sqrt{2}$

$\cos \Theta = \frac{\vec{v} \cdot \vec{w}}{|\vec{v}| |\vec{w}|}$

$\cos \Theta = \frac{-9}{\sqrt{30} \cdot 3\sqrt{2}} = \frac{-9}{6\sqrt{15}}$

$\Theta = 112.8^\circ$



1) Given the points A (3, 4, -1) and B (7, -6, 5)

SOLUTIONS

Find

a) the midpoint

$$\left( \frac{x_1+x_2}{2}, \frac{y_1+y_2}{2}, \frac{z_1+z_2}{2} \right)$$

$$\frac{3+7}{2}, \frac{4+(-6)}{2}, \frac{(-1)+5}{2}$$

$$(5, -1, 2)$$

b) the distance between points

$$d = \sqrt{(x_1-x_2)^2 + (y_1-y_2)^2 + (z_1-z_2)^2}$$

$$d = \sqrt{(3-7)^2 + (4-(-6))^2 + (-1-5)^2}$$

$$d = \sqrt{16+100+36} = \sqrt{152} = 2\sqrt{38}$$

Note: the formulas are same as 2-D midpoint and distance formulas. We just add the z-coordinate

2) Find the intersection of the 2 lines

$$l \begin{cases} x = 4t + 1 \\ y = t + 3 \\ z = -2t + 8 \end{cases} \quad m \begin{cases} x = 5s - 10 \\ y = -3s + 13 \\ z = 2s \end{cases}$$

Note: the direction of l is <4, 1, -2> and the direction of m is <5, -3, 2> so, the lines are not parallel. There is an intersection..

Substitution: set x's, y's, and z's equal to each other..

$$\begin{aligned} 4t + 1 &= 5s - 10 \implies 5s - 4t = 11 \\ t + 3 &= -3s + 13 \implies 3s + t = 10 \\ -2t + 8 &= 2s \end{aligned}$$

solve system:

$$\begin{aligned} 5s - 4t &= 11 \\ 12s + 4t &= 40 \\ \hline 17s &= 51 \quad s = 3 \\ t &= 1 \end{aligned}$$

plug in s and t....

$$\begin{aligned} x &= 4(1) + 1 = 5 & x &= 5(3) + 10 = 5 \\ y &= (1) + 3 = 4 & y &= -3(3) + 13 = 4 \\ z &= -2(1) + 8 = 6 & z &= 2(3) = 6 \end{aligned} \quad (5, 4, 6)$$

3) What is the intersection of the planes

$$\begin{aligned} 3x + 5y + z + 6 &= 0 \\ 2x - y + 3z + 1 &= 0 \end{aligned}$$

solve the system:

$$\begin{aligned} 3x + 5y + z &= -6 \\ 10x - 5y + 15z &= -5 \\ \hline 13x + 16z &= -11 \end{aligned}$$

Now, we'll create a parametric equation:

$$\begin{aligned} \text{let } x &= t & 13t + 16z &= -11 \\ & & 16z &= -13t - 11 \\ & & z &= \frac{-13}{16}t - \frac{11}{16} \end{aligned}$$

$$\begin{aligned} x &= t \\ y &= -\frac{7}{16}t - \frac{17}{16} \\ z &= \frac{-13}{16}t - \frac{11}{16} \end{aligned}$$

then, use one of the original planes to find y...

$$\begin{aligned} 3x + 5y + z + 6 &= 0 \\ 3t + 5y + \frac{-13}{16}t - \frac{11}{16} + 6 &= 0 \\ 5y + \frac{35}{16}t + \frac{85}{16} &= 0 \\ y &= -\frac{7}{16}t - \frac{17}{16} \end{aligned}$$

Let's check a point: assume t = 0,

$$\begin{aligned} x &= 0 \\ y &= -17/16 \\ z &= -11/16 \end{aligned}$$

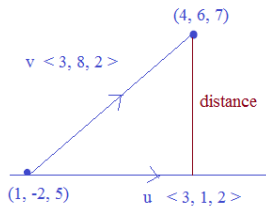
does (0, -17/16, -11/16) lie in both planes?

$$\begin{aligned} 3(0) + 5(-17/16) + (-11/16) + 6 &= 0 \\ 0 + -85/16 + -11/16 + 6 &= 0 \quad \checkmark \\ 2(0) - (-17/16) + 3(-11/16) + 1 &= 0 \\ 0 + 17/16 - 33/16 + 1 &= 0 \quad \checkmark \end{aligned}$$

4) Find the distance from the point to the line

SOLUTIONS

line:  $x = 3t + 1$     point:  $(4, 6, 7)$   
 $y = t - 2$   
 $z = 2t + 5$



distance =  $\frac{|u \times v|}{|u|}$      $u = \langle 3, 1, 2 \rangle$      $u$  is direction of line  
 $v = \langle 3, 8, 2 \rangle$      $v$  is the direction from the point to some point on the line

$u \times v = \begin{vmatrix} i & j & k \\ 3 & 1 & 2 \\ 3 & 8 & 2 \end{vmatrix} \Rightarrow \begin{vmatrix} 1 & 2 \\ 8 & 2 \end{vmatrix} i - \begin{vmatrix} 3 & 2 \\ 3 & 2 \end{vmatrix} j + \begin{vmatrix} 3 & 1 \\ 3 & 8 \end{vmatrix} k = -14i - 0j + 21k \Rightarrow$  length is  $\sqrt{(-14)^2 + (21)^2} = \sqrt{637}$   
length of  $u$  is  $\sqrt{(3)^2 + (1)^2 + (2)^2} = \sqrt{14}$

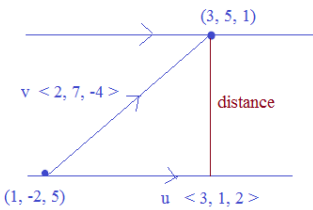
distance =  $\frac{\sqrt{637}}{\sqrt{14}}$   
approx. 6.75

5) Find the distance between the lines.

$x = 3t + 1$      $x = 3s + 3$   
 $y = t - 2$      $y = s + 5$   
 $z = 2t + 5$      $z = 2s + 1$

distance =  $\frac{|u \times v|}{|u|}$

Note: the lines are parallel.. each vector is  $\langle 3, 1, 2 \rangle$   
if they weren't parallel, then the distance between them would be 0 (i.e. the intersection point)



$u = \langle 3, 1, 2 \rangle$      $|u| = \sqrt{(3)^2 + (1)^2 + (2)^2} = \sqrt{14}$

$v = \langle 2, 7, -4 \rangle$   
 $u \times v = \begin{vmatrix} i & j & k \\ 3 & 1 & 2 \\ 2 & 7 & -4 \end{vmatrix} = \begin{vmatrix} 1 & 2 \\ 7 & -4 \end{vmatrix} i - \begin{vmatrix} 3 & 2 \\ 2 & -4 \end{vmatrix} j + \begin{vmatrix} 3 & 1 \\ 2 & 7 \end{vmatrix} k = \langle -18, 16, 19 \rangle$

$|u \times v| = \sqrt{(-18)^2 + (16)^2 + (19)^2} = \sqrt{941}$

distance =  $\frac{\sqrt{941}}{\sqrt{14}} = 8.2$  (approx.)

6) What is the equation of the plane containing the points

Note: 3 non-collinear points determine a plane or, 2 distinct lines

$(1, 4, -2)$   $(5, 0, 2)$  and  $(3, -1, 3)$

For a plane, we need the normal vector and a point...

To find the normal vector, we'll take the cross product of 2 vectors in the plane...

vector 1: using  $(1, 4, -2)$  to  $(5, 0, 2)$      $\langle 4, -4, 4 \rangle$   
vector 2: using  $(1, 4, -2)$  to  $(3, -1, 3)$      $\langle 2, -5, 5 \rangle$

Note: we choose 2 vectors that start from the same point...



cross product of vectors

normal vector =  $\begin{vmatrix} i & j & k \\ 4 & -4 & 4 \\ 2 & -5 & 5 \end{vmatrix} = \begin{vmatrix} -4 & 4 \\ -5 & 5 \end{vmatrix} i - \begin{vmatrix} 4 & 4 \\ 2 & 5 \end{vmatrix} j + \begin{vmatrix} 4 & -4 \\ 2 & -5 \end{vmatrix} k \Rightarrow 0i - 12j - 12k \quad \langle 0, -12, -12 \rangle$

The normal vector is perpendicular to the vectors lying in the plane..  
Let's check our answer:

$\langle 0, -12, -12 \rangle \cdot \langle 4, -4, 4 \rangle = 0 + 48 - 48 = 0$  ✓  
 $\langle 0, -12, -12 \rangle \cdot \langle 2, -5, 5 \rangle = 0 + 60 - 60 = 0$  ✓  
dot products equal 0

Equation of a plane:  $Ax + By + Cz + D = 0$

To find  $D$ , we'll plug in a point:  $(5, 0, 2)$      $0(5) + -12(0) + -12(2) + D = 0$   
and, the normal vector:  $\langle 0, -12, -12 \rangle$      $D = 24$

$-12y - 12z + 24 = 0$

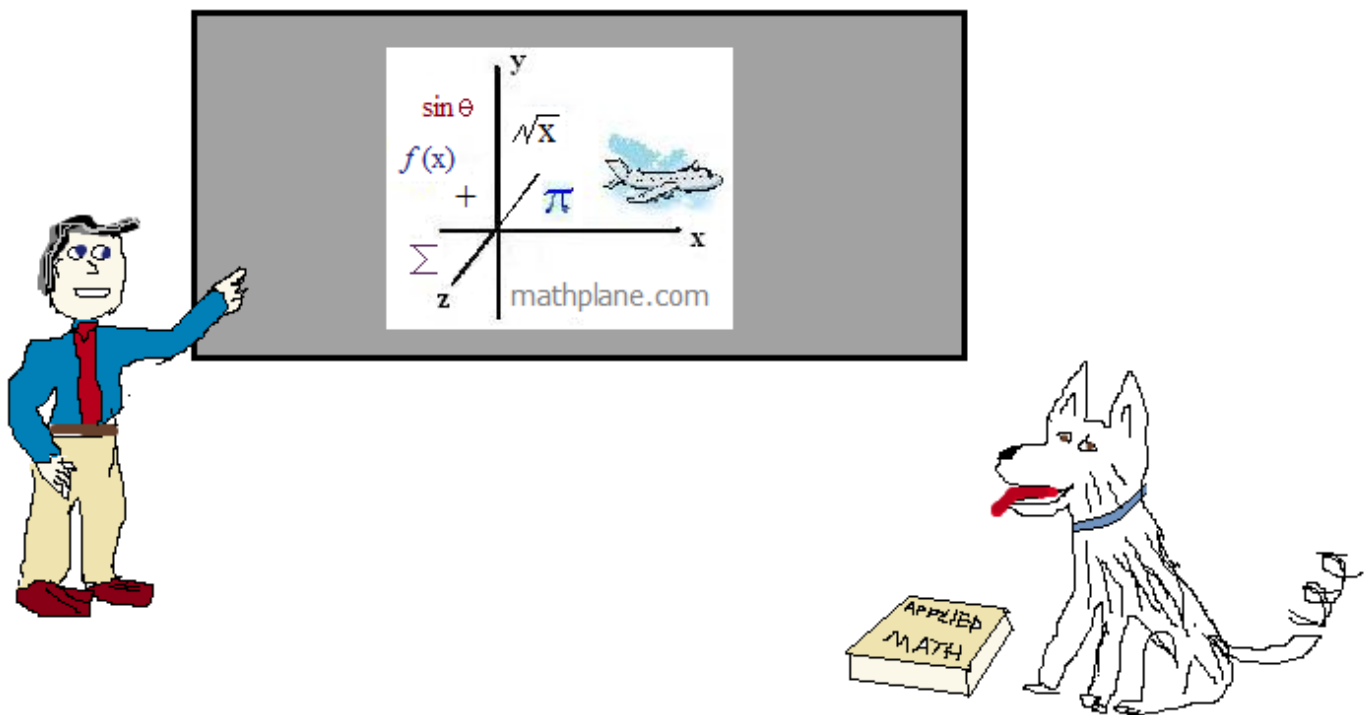
To check our answer, we'll plug in the 3 points:

$(5, 0, 2)$      $-12(0) - 12(2) + 24 = 0$  ✓  
 $(1, 4, -2)$      $-12(4) - 12(-2) + 24 = 0$  ✓  
 $(3, -1, 3)$      $-12(-1) - 12(3) + 24 = 0$  ✓

Thanks for visiting. (Hope it helps!)

If you have questions, suggestions, or requests, let us know.

Good luck.



Also, find Mathplane material at Teacherspayteachers and TES

Or our Mathplane.ORG site.