

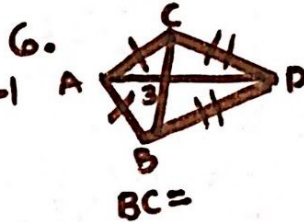
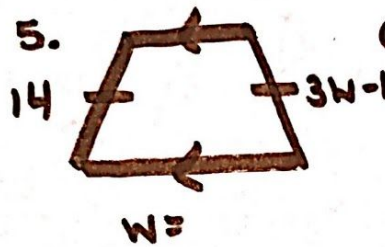
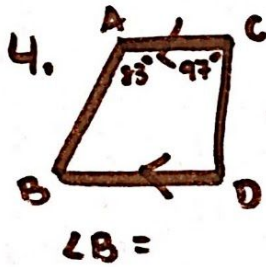
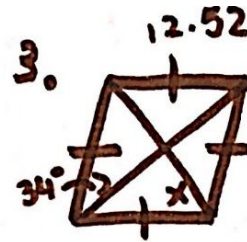
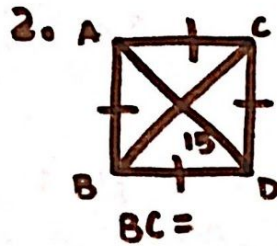
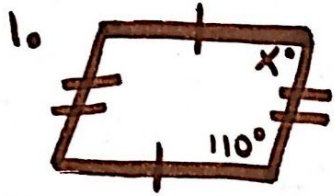


Quadrilaterals & Circles: Practice Activity

Directions: Find the value of x in the following questions.



Answers:

1. 70

2. 30

3. 56

4. 83

5. 5

6. 6

7. 128

8. 37

9. 13.3

10. 70

11. 30

12. 50