

Vineyard Elementary, Florida

Some papers = No Name, Date

Sharon Deegan NOTATED

19 pages ~~13~~ pages

November, 2023

November 17th, 2023

VINELAND

Homework/Notes

Communication


Parent Initials

Parent Initials

Parent Initials

Parent Initials

Welcome to
our room !!



Liam enjoyed
1st Day & was glad
Students provided
Love! cupcake (drawing of a cupcake)
Teacher


Parent Initials

Parent Initials

November, 2023

VINELAND

	Homework/Notes	Communication
Nov. 20	<p>Please read nightly and write book on reading log. thank you</p> <p>Please return the field trip forms</p>	<p>Liam lost recess (N)</p> <p>Parent Initials <i>SD</i></p>
Nov. 21	<p>Thanksgiving N/A <i>SD</i></p>	<p>Thanksgiving thank you N/A</p> <p>Parent Initials <i>SD</i></p>
Nov. 22	<p>Thanksgiving Break -- NO SCHOOL</p>	<p>Parent Initials</p>
Nov. 23	<p>Thanksgiving Break -- NO SCHOOL</p>	<p>Parent Initials</p>
Nov. 24	<p>Thanksgiving Break -- NO SCHOOL</p>	<p>Parent Initials</p>



VINELAND Weekly Reading Log

Day	Title of What I Read:	Number of Minutes	Parent Initials
Monday 11/20/2023	puff - The cloud piggy & Gerald - Slop	200	SD
Tuesday 11/21/2023	Respectful Book Video game - Teleprompter	200	SD
Wednesday 11/22/2023	Manners Book video game - Teleprompter	200	SD
Thursday 11/23/2023	Respectful Book puff - The cloud	200	SD
Friday 11/24/2023	piggy & Gerald icecream & we are in a book	200	SD
Saturday 11/25/2023	CHRISTMAS Joy video	200	SD
Sunday 11/26/2023	Emilys magic words video	200	SD
	Total Number of Minutes Read:	1400	SD

Student Name: Liam

VINELAND
Date: 11/20/23

FLRVL 2-08-00 Digital Readiness Diagnostic

1) Choose the correct answer.

$$11 + 6 = ?$$

- ☐ 14
- ☐ 15
- ☐ 16
- ☒ 17

2) Choose the correct answer.

How many sides does a rectangle have?

- ☐ 6
- ☒ 5
- ☐ 4
- ☐ 3

3) Choose the correct answer.

$$13 - 5 = ?$$

- ☒ 7
- ☒ 8
- ☐ 9
- ☐ 10

4) Choose the correct answer.

What is the name of a closed figure with 3 straight sides?

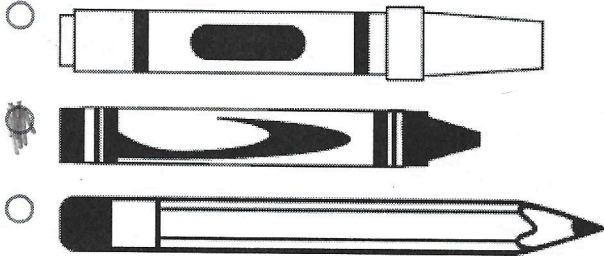
- ☐ square
- ☒ circle
- ☒ triangle
- ☐ rectangle

Student Name: _____

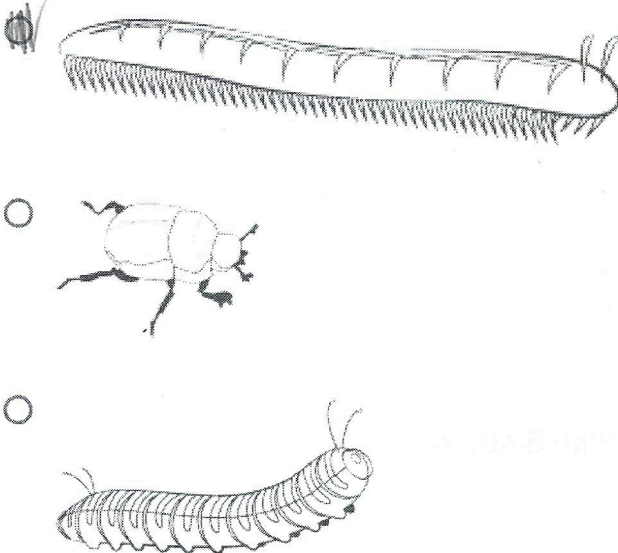
Date: _____

FLRVL 2-08-00 Digital Readiness Diagnostic

- 5) Choose the correct answer.
Look at the objects.
Which object is shortest?



- 6) Choose the correct answer.
Look at the objects.
Which object is longest?



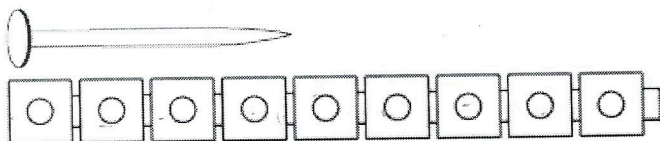
Student Name: Liam O'Callaghan

Date: 11/20/23

FLRVL 2-08-00 Digital Readiness Diagnostic

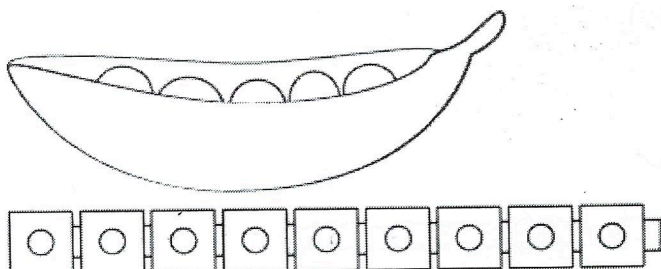
Vineland

- 7) Choose the correct answer.
Look at the object and the cubes.



- ✓ About how many cubes long is the object?
- ☐ about 3 cubes
 - ☐ about 5 cubes
 - ☒ about 4 cubes
 - ☐ about 6 cubes

- 8) Choose the correct answer.
Look at the object and the cubes.



- ✓ About how many cubes long is the object?
- ☐ about 5 cubes
 - ☐ about 6 cubes
 - ☒ about 7 cubes
 - ☐ about 8 cubes

Student Name: _____

Vineyard

Date: _____

FLRVL 2-08-00 Digital Readiness Diagnostic

- 9) Choose the correct answer.
Look at the object and the paper clips.



How many paper clips long is the object?

- ☐ 4 paper clips
☒ 6 paper clips
☐ 5 paper clips
☐ 7 paper clips

- 10) Choose the correct answer.
Look at the object and the paper clips.




How many paper clips long is the object?

- ☒ 5 paper clips
☐ 6 paper clips
☐ 7 paper clips
☐ 8 paper clips

Name

L/M

4/10



Date

12-4-2023

Read the passage and answer the questions that follow.

Why Possum's Tail Is Bare



- 1 Possum once had a long, bushy tail. He was proud of it. He talked about it all the time. He showed it to everyone. All the animals knew about Possum's beautiful tail. No one wanted to hear about it anymore.

2 Rabbit was tired of Possum's talk. She did not have a long tail. She decided to play a trick on Possum.

3 Rabbit planned a big dance. She invited all the animals. Possum asked for a special seat in front. He wanted to show off his tail. Rabbit sent Cricket to comb Possum's tail. She told Possum she wanted his tail to be perfect.

4 Cricket sang as she combed the tail. Possum fell asleep. Then Cricket cut the fur from Possum's tail. She wrapped the bare tail in red ribbon. Possum's tail was hidden.

5 Soon, it was time for the dance. Possum sat in his special seat. Everyone saw the beautiful ribbon around his tail. Possum sang and danced around. He showed off his tail. All the animals watched.

6 Then Possum untied the ribbon. Suddenly, all the animals began laughing. They pointed at Possum's tail. Possum looked back. His bushy tail was no longer bushy. It was bare, like a lizard's skin! That is why possums have bare tails.

Vineland

1. Which sentence **best** describes Rabbit at the beginning of the story?

- ✓
- A. She is angry and ignores Possum.
 - B. She is curious and asks Possum questions.
 - ☒ C. She is clever and plays a trick on Possum.

2. Read this sentence from paragraph 6.

“It was bare, like a lizard’s skin!”

✓ What is the phrase like a lizard’s skin an example of?

- ☒ A. simile
- B. idiom
- C. alliteration

X 3. Which event happens in the middle of the story?

- ☒ A. Cricket combs Possum’s tail while he slept.
- ☒ B. Possum brags about his bushy tail.
- C. Possum reveals his tail under the ribbon.

4. How are the animals’ perspectives **different** from Possum’s in paragraph 5?

- X
- A. They think that Possum should not dance and sing.
 - ☒ B. They know that Possum’s tail is bare beneath the ribbon.
 - ☒ C. They can tell Cricket likes Possum’s tail.

5. What is the message of this story?

- X
- ☒ A. Looking different is okay.
 - B. Telling the truth is important.
 - ☒ C. Bragging can get you in trouble.

GO ON 

Vineland

6. Which word has the same vowel sound as corn?

- ☒ A. broke
☒ B. board
C. beard

7. Which word has the same vowel sound as store?

- ☒ A. porch
B. heart
☒ C. other

8. Which word has the same vowel sound as roar?

- ☒ A. care
B. solar
☒ C. before

9. Which word has the same beginning vowel sound as forest?

- ☒ A. boxer
☒ B. short
C. power

10. Which word has the same beginning vowel sound as hornet?

- ☒ A. scream
☒ B. spare
☒ C. shore



Name

Liam

Date

Vineland

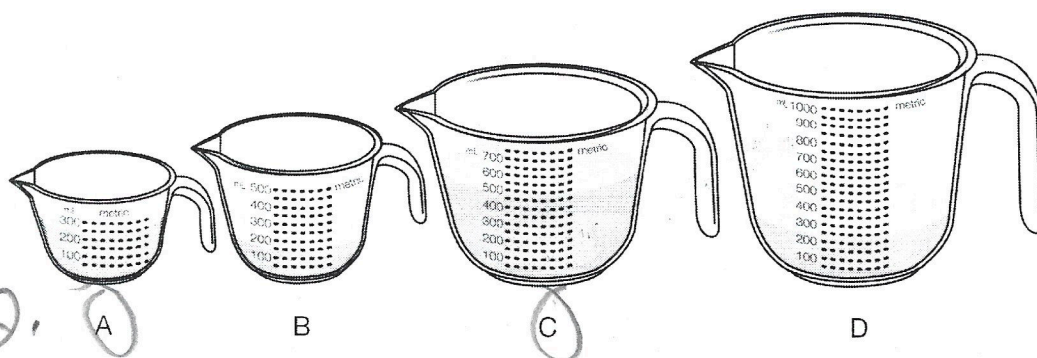
VINELAND
12-5-2023

Lesson Quiz

3/5

60%

Use the picture to answer questions 1 and 2. Look at the amount of water in each measuring container.



1. Which contains the most water?

A. A

B. B

✓ C. C

D. D

31 2. You pour all of the water from container A into a new container. The new container is taller. How much water will be in the new container?

X A. 150 mL

B. 250 mL

C. 500 mL

D. You would need to measure the water in the new container.

Name

Liam

Vineland

Date

? @

4/3. Think about properties of matter. Which is the **best** use of a solid, liquid, or gas?

A. filling a bicycle tire with water

✓ B. filling a pool with water

C. filling a pool with air

D. filling a bicycle tire with rocks

5/4. Which statement about water vapor is true?

A. It is a gas that you cannot see.

✓ B. It is a liquid that you cannot see.

C. It is a solid that changes shape.

D. It is a liquid that changes shape.

? why
Number crossed out
Sh

Name: LiamDate: 12-8-2023

1. Coordinates are _____ and _____ along the margins of the map.

- ☐ A. numbers and pictures
- ☐ C. numbers and letters

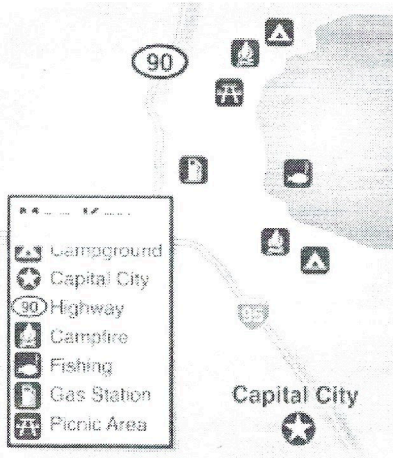
- ☒ B. numbers and symbols
- ☐ D. symbols and letters

25%

1st attempt

ATTEMPT 58
SD.Date accurate?
SD

2.



Maps have symbols. What helps the reader understand what these symbols mean?

- ☐ A. map key
- ☐ C. numbers and letters

- ☐ B. compass rose
- ☒ D. scale

3. You can tell the distance on a map by looking at the _____.

- ☐ A. theme map
- ☐ C. compass rose

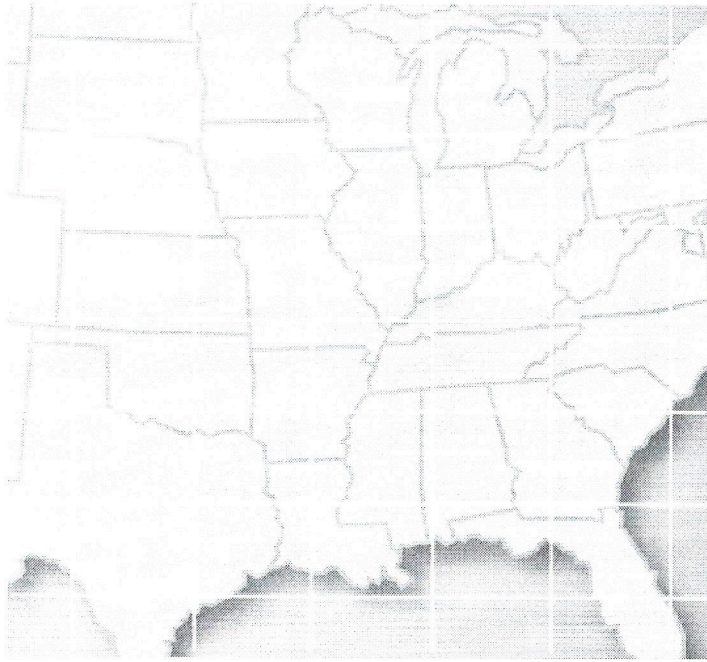
- ☒ B. map key
- ☐ D. scale

4. What does a political map show?

- ☐ A. regions of a place
- ☒ C. boundaries

- ☐ B. how many people live there
- ☐ D. mountains and bodies of water

5.



Vineland
accurate
for grade 2?

coordinate grid, which list would you use?

If you were to label this


☐ A. Names of states going across and the name of the country going down.

☐ B. A-B-C-D-E-F going across and 1-2-3-4-5-6-7 going up.

☒ C. A-B-C-D-E-F going across and F-E-D-C-B-A going up.

☐ D. 1-2-3-4-5-6 going across and 1-2-3-4-5-6-7 going up.

6.



north, what is 3:00?

The compass rose is like a clock. If 12:00 is

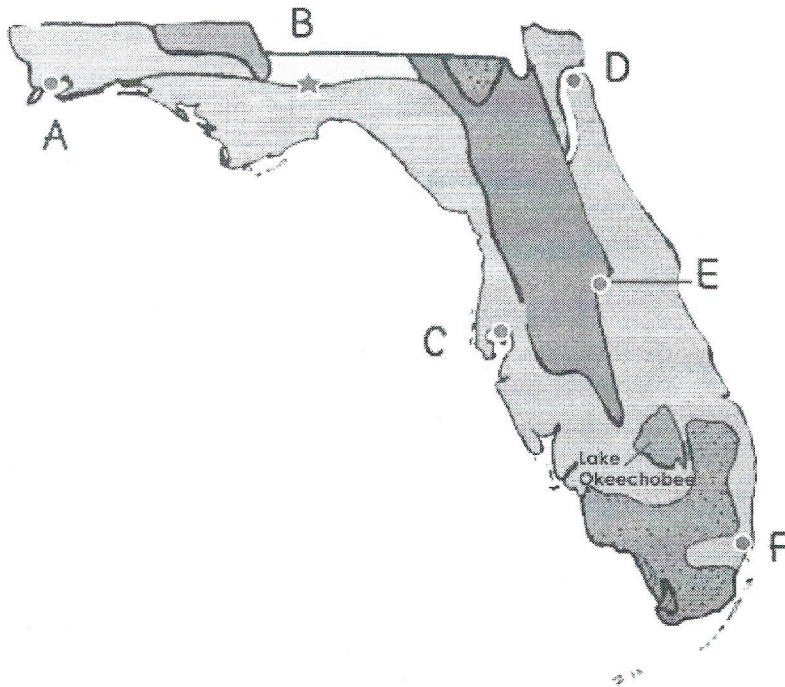
☐ A. north

☐ B. south

☒ C. east

☐ D. west

7.



Vineland

capital of Florida?

- ☐ A. A
- ☐ C. C

- ☐ B. B
- ☐ D. D

Which label is the

8. A _____ shows special things like the regions of a place or how many people live there.

- ☐ A. physical map
- ☐ C. political map

- ☐ B. theme map
- ☐ D. world map


Name

L'J & M

Date

Vineyard
? (sb)
not dated
disorganized
(sb)

3. Look at the picture.



Why is glass a good choice for making a window?

- A. It is a gas.
- B. It is a liquid.
- C. It is a solid and you cannot open it.
- D. It is a solid and you can see through it.

4. Which statement is true of solids?

- A. You do not need solids.
- B. You cannot measure solids.
- C. Solids take the shape of their container.
- D. Solids come in many shapes, sizes, and materials.

Name

LIM

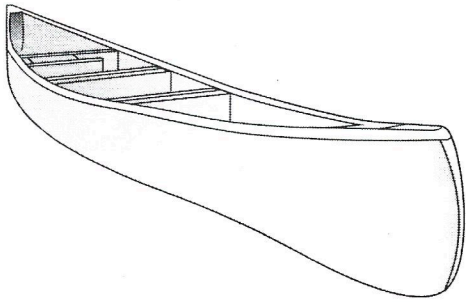
Date

No DATE
VINELAND

Lesson Quiz

1572

Use the picture to answer questions 1 and 2. A canoe must have its own shape. It must be able to stay on top of a liquid. It needs to be strong. It needs to be light enough to carry.



1. What material is best to build a canoe?

- A. gas
- ✓ B. air
- ~~C. wood~~
- D. water

2. Select the sentence that provides evidence that the canoe is solid.

- ✓ A. A canoe must have its own shape.
- ~~B. It must be able to stay on top of a liquid.~~
- C. It needs to be strong.
- ~~D. It needs to be light enough to carry.~~

From Vineland:

The pages handed to me
were unorganized/out of order
and No name

Sharon Degnan