


How Much Will You Spend? 2-26-24



Write the price for each toy below.
Add to find the total cost.

A.



43¢



+ 15¢
58¢

B.




25



+ 24
49¢

C.



56



+ 43
99¢

D.




42



+ 15
57¢

E.



8




+ 24
32¢

F.



35











+ 56
91¢

How Much?

2-26-24

QW

- Look at the price of each toy. Look at each set of coins. Circle the exact amount you would need to buy each toy.

<p>A.</p> 	
<p>B.</p> 	
<p>C.</p> 	
<p>D.</p> 	

Name: L. J. M.

2-26-24

milk

bread

butter

water

fish

hat

mat

clock

hand

hour

minute

milk

bread

butter

water

fish

hat

mat

clock

hand

hour

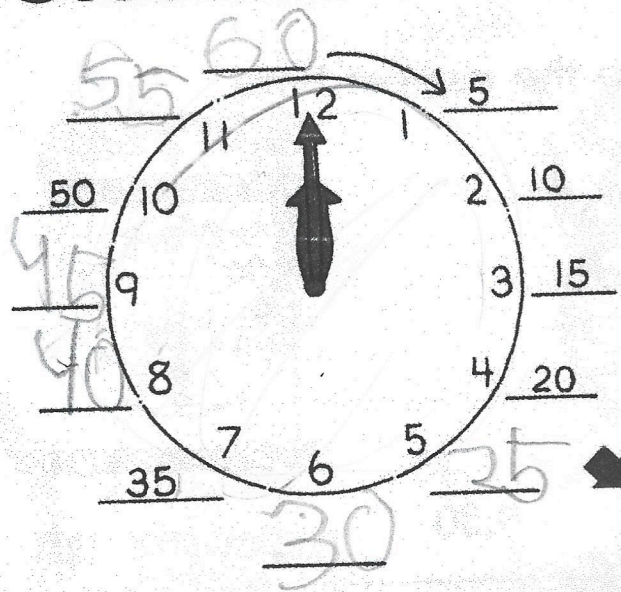
minute

✓ @

Name: Liam

2-27-2024


Give Me Five!



It takes 5 minutes for the minute hand to move from one number to the next.

5, 10, 15
20

Count by fives.
Write the numbers
on the lines.



POSS-FS-S

Sum of 29mm

SP
OS+

(5)

FS

(1)

SP
114
25

(2)

FS
OS+

(2)

SP
18
OS+

(2)

FS
OS+

(4)

SP
85
OS+

(5)

FS
OS+

(11)

Name: Liana

2-27-2024

$$\begin{array}{r} 24 \\ + 2 \\ \hline 26 \end{array}$$

$$\begin{array}{r} 42 \\ + 20 \\ \hline 62 \end{array}$$

$$\begin{array}{r} 30 \\ + 30 \\ \hline 60 \end{array}$$

$$\begin{array}{r} 12 \\ + 11 \\ \hline 23 \end{array}$$

$$\begin{array}{r} 20 \\ + 12 \\ \hline 32 \end{array}$$

$$\begin{array}{r} 18 \\ + 20 \\ \hline 38 \end{array}$$

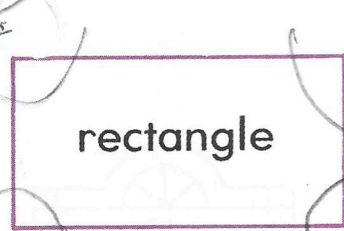
$$\begin{array}{r} 14 \\ + 3 \\ \hline 17 \end{array}$$

$$\begin{array}{r} 28 \\ + 12 \\ \hline 40 \end{array}$$

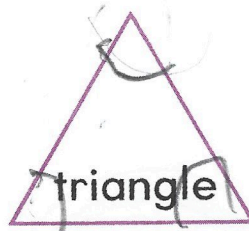
Recognizing Shapes

2-27-2024


How many corners? How many sides? Write the numbers.



4 corners
4 sides





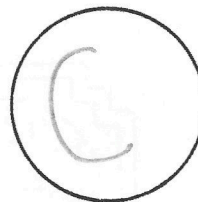
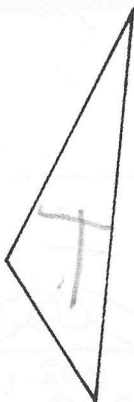
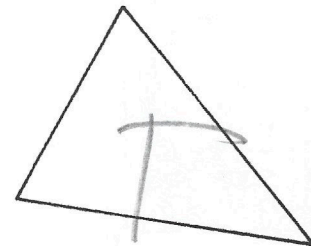


3 corners
3 sides



4 corners
4 sides

✓ @

Put a C inside each circle.
Put a T inside each triangle.
Put an R inside each rectangle.
Put an S inside each square.






Time on Our Hands




2-27-2024

Draw the hands on each clock, so they will show the correct time.



A.



B.



C.



Skill: telling time - showing specified times

Name: L. J. M.

✓

2-28-24

$$5 - 0 = 5$$

$$5 - 1 = 4$$

$$5 - 2 = 3$$

$$5 - 3 = 2$$

$$5 - 4 = 1$$

$$5 - 5 = 0$$

$$2 - 0 = 2$$

$$2 - 1 = 1$$

$$2 - 2 = 0$$

$$2 - 3 = \text{X } 1$$

$$2 - 4 = \text{X } 2$$

$$2 - 5 = \text{X } 3$$

✓

Name: Liam O'Callaghan 2-28-24

write and underline day

Sunday

Monday

Tuesday

Wednesday

Thursday

Friday

Saturday

Sunday

Monday

Tuesday

Wednesday

Thursday

Friday

Saturday

Measure the line.

how many inches is the line?

5 inches

Name:

LIM

✓

2-28-24

th

underline th

The

Them

Those

There

Their

underline wh

Why

What

Who

Where

Name: Wick M

✓(S)

2-28-24

①

$$\begin{array}{r} 58 \\ + 21 \\ \hline 79 \end{array}$$

②

$$\begin{array}{r} 22 \\ + 11 \\ \hline 33 \end{array}$$

③

$$\begin{array}{r} 49 \\ + 10 \\ \hline 59 \end{array}$$

④

$$\begin{array}{r} 50 \\ + 10 \\ \hline 60 \end{array}$$

⑤

$$\begin{array}{r} 51 \\ + 10 \\ \hline 61 \end{array}$$

⑥

$$\begin{array}{r} 60 \\ + 10 \\ \hline 70 \end{array}$$

⑦

$$\begin{array}{r} 61 \\ + 10 \\ \hline 71 \end{array}$$

⑧

$$\begin{array}{r} 70 \\ + 10 \\ \hline 80 \end{array}$$





Opposites

2-29-24

✓@

Hot/Cold

In each box, color the hot thing red. Color the cold thing blue.



Write the missing letters to spell hot.

h o t

h a t





h o t

Opposites


2-29-24

Top/Bottom

Circle **top** or **bottom** to tell where the rabbit is.



Circle the word that tells where the rabbit is now.

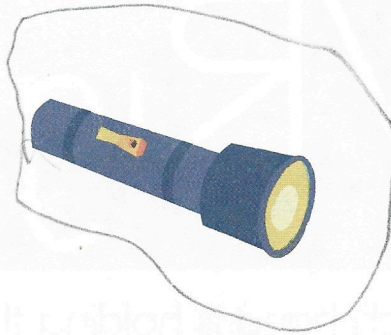
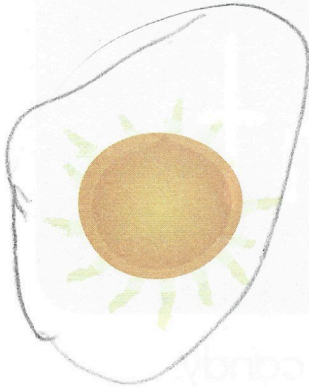


in
out


Categories

2-29-24


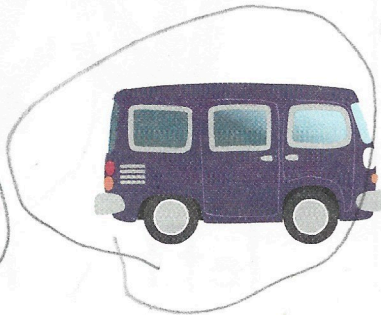
Circle the objects that give light.



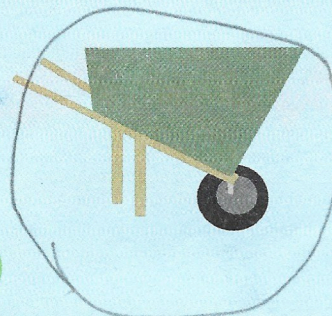
Circle the animals with fur.



Circle things to ride in or on.



I have two legs, but they only touch the ground when I am not moving. What am I? Circle the answer.



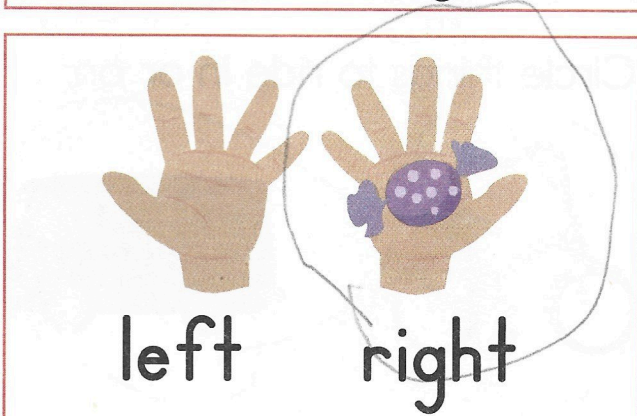
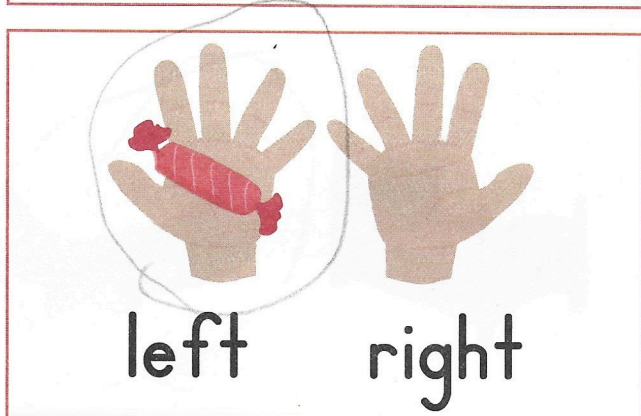

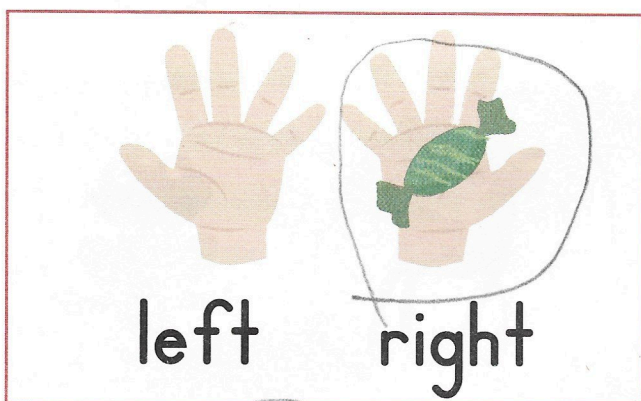
Opposites

Liam



2-29-24

Left/Right

Circle **left** or **right** to tell which hand is holding the candy.



Circle the candy that comes next.



Name: L'iam

19

3-4-2024

Circle GREATER ~~11~~

Greater
 \leftarrow $<$
 $>$ less

(1) 78 ~~11~~ $<$ 102

(2) 40 $>$ 12

(3) 27 $<$ 56

(4) 41 $>$ 18

(5) 64 $>$ 15

(6) 12 $<$ 50

(7) 112 $>$ 32


Opposites

3-4-2024

Shw ✓

Big/Little

In each box, circle the pet that is bigger. or FATER



Count the birds. Circle the number.




3-4-2024


Add or subtract. Color the shirts for each number family a different color.

Hint: There are four shirts for each family.

A.



B.




C.



D.




E.




F.




G.



H.



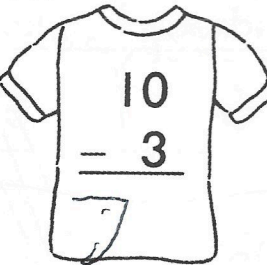
I.



J.




K.



L.




M.



N.



O.



P.



Q.



R.



S.



T.






Skill: understanding number families

Counting

3-5-2024

✓

Count the animals. Match the groups and numbers.



5

2

3

1

4

Circle the animal with the longer tail.

