

Liam Jan. 24, 2025

Place Value Practice



6 4 3 1 5 8 2 9 0

- A. Use the digits 3 and 7.
Make a 2-digit number
less than 48.

37

- B. Use the digits 1 and 6.
Make a 2-digit number
greater than 52.

61

- C. Use the digits 2 and 4.
Make a 2-digit number
less than 30.

24 / 22

missed

- D. Use the digits 3 and 7.
Make a 2-digit number
greater than 64.

73

- E. Use the digits 9, 4, and
6. Make two 2-digit
numbers less than 50.

94 44

- F. Use the digits 3, 1, and
9. Make two 2-digit
numbers greater than
40.

93 91

- G. Use the digits 3, 2, and
6. Make two 2-digit
numbers less than 30.

23 21

- H. Use the digits 5, 3, and
6. Make two 2-digit
numbers greater than
55.

65 66

Name: Liam

✓ Jan. 24, 2025

✓ Dec. 12, 2024

Multiplication

please write 1 fine

$$\begin{array}{l} 2 \times 1 = 2 \\ 2 \times 2 = 4 \\ 2 \times 3 = 6 \\ 2 \times 4 = 8 \\ 2 \times 5 = 10 \\ 2 \times 6 = 12 \\ 2 \times 7 = 14 \\ 2 \times 8 = 16 \\ 2 \times 9 = 18 \\ 2 \times 10 = 20 \\ 2 \times 11 = 22 \\ 2 \times 12 = 24 \end{array}$$

$$\begin{array}{l} 2 \times 1 = 2 \\ 2 \times 2 = 4 \\ 2 \times 3 = 6 \\ 2 \times 4 = 8 \\ 2 \times 5 = 10 \\ 2 \times 6 = 12 \\ 2 \times 7 = 14 \\ 2 \times 8 = 16 \\ 2 \times 9 = 18 \\ 2 \times 10 = 20 \\ 2 \times 11 = 22 \\ 2 \times 12 = 24 \end{array}$$

$$\begin{array}{l} 3 \times 1 = 3 \\ 3 \times 2 = 6 \\ 3 \times 3 = 9 \\ 3 \times 4 = 12 \\ 3 \times 5 = 15 \\ 3 \times 6 = 18 \\ 3 \times 7 = 21 \\ 3 \times 8 = 24 \\ 3 \times 9 = 27 \\ 3 \times 10 = 30 \\ 3 \times 11 = 33 \\ 3 \times 12 = 36 \end{array}$$

$$\begin{array}{l} 3 \times 1 = 3 \\ 3 \times 2 = 6 \\ 3 \times 3 = 9 \\ 3 \times 4 = 12 \\ 3 \times 5 = 15 \\ 3 \times 6 = 18 \\ 3 \times 7 = 21 \\ 3 \times 8 = 24 \\ 3 \times 9 = 27 \\ 3 \times 10 = 30 \\ 3 \times 11 = 33 \\ 3 \times 12 = 36 \end{array}$$

Jan 27, 2025

ACTS OF KINDNESS

Draw a picture of you doing an act of kindness.

Ireland



Ladies First

Jan. 27, 2025

KINDNESS COUNTS

mon assisted

Things people do for me:

Things I do for other people:

make breakfast

tell strangers stop it

help bathroom

when they scream

help schoolwork

at me.

make lunch

hold door people

make dinner

tidy up

make bed

do schoolwork

brush teeth

make bed

gives chocolate

being kind

teach to be safe

being safe

and kind

manners

speaking nice to mom

Name: Liam

✓ Jan. 24, 2025
✓ Dec. 12, 2024

Multiplication

please write 1 time

$$\begin{array}{l} 2 \times 1 = 2 \\ 2 \times 2 = 4 \\ 2 \times 3 = 6 \\ 2 \times 4 = 8 \\ 2 \times 5 = 10 \\ 2 \times 6 = 12 \\ 2 \times 7 = 14 \\ 2 \times 8 = 16 \\ 2 \times 9 = 18 \\ 2 \times 10 = 20 \\ 2 \times 11 = 22 \\ 2 \times 12 = 24 \end{array}$$

$$\begin{array}{l} 3 \times 1 = 3 \\ 3 \times 2 = 6 \\ 3 \times 3 = 9 \\ 3 \times 4 = 12 \\ 3 \times 5 = 15 \\ 3 \times 6 = 18 \\ 3 \times 7 = 21 \\ 3 \times 8 = 24 \\ 3 \times 9 = 27 \\ 3 \times 10 = 30 \\ 3 \times 11 = 33 \\ 3 \times 12 = 36 \end{array}$$

$$\begin{array}{l} 2 \times 1 = 2 \\ 2 \times 2 = 4 \\ 2 \times 3 = 6 \\ 2 \times 4 = 8 \\ 2 \times 5 = 10 \\ 2 \times 6 = 12 \\ 2 \times 7 = 14 \\ 2 \times 8 = 16 \\ 2 \times 9 = 18 \\ 2 \times 10 = 20 \\ 2 \times 11 = 22 \\ 2 \times 12 = 24 \end{array}$$

$$\begin{array}{l} 3 \times 1 = 3 \\ 3 \times 2 = 6 \\ 3 \times 3 = 9 \\ 3 \times 4 = 12 \\ 3 \times 5 = 15 \\ 3 \times 6 = 18 \\ 3 \times 7 = 21 \\ 3 \times 8 = 24 \\ 3 \times 9 = 27 \\ 3 \times 10 = 30 \\ 3 \times 11 = 33 \\ 3 \times 12 = 36 \end{array}$$

Monday
January 27, 2025


Mrs. Posy's Roses

Directions: Read the story, and then answer the questions.

Mrs. Posy plants roses everywhere. She plants yellow roses near her front porch. She plants red roses near the back door. There are also pink roses and white roses in her yard.

Every time the postal carrier comes to her house, he sneezes. "You should not plant so many flowers," he tells Mrs. Posy.

Mrs. Posy just smiles.



1. What are Mrs. Posy's favorite flowers? roses
2. Why do you think the postal carrier tells Mrs. Posy, "You should not plant so many flowers"?
he sneezes
3. Why does Mrs. Posy smile? because she
is in Ireland

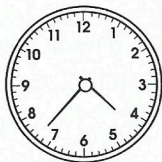
Name

L 19/4 000A
Jan 27, 2025Feb 11, 2025
- reviewed again

Time

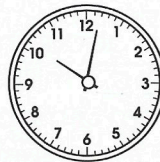
What time is shown on the clocks below? Fill in the bubble of the correct answer.

45.



- Ⓐ 7:20
Ⓑ 4:08
Ⓒ 4:37
Ⓓ 7:40

46.




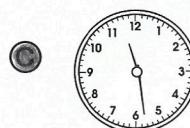
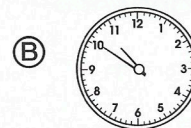

- Ⓐ 10:02
Ⓑ 12:50
Ⓒ 2:10
Ⓓ 12:10

47. Ella started practicing piano at 6:20 p.m. She finished practicing at 6:55 p.m. How many minutes did Ella spend practicing piano?

- Ⓐ 20
Ⓑ 25
Ⓒ 30
Ⓓ 35

55
20
35

48. Seth ran a marathon last Saturday. The marathon started at 7:00 a.m. It took Seth 4 hours and 28 minutes to complete the race. What time did Seth finish the race? Choose the clock that shows the correct time.



49. Shannon arrived at the movie theater at 4:30 p.m. The drive from her house to the theater takes 20 minutes. What time did Shannon leave her home to go to the movie theater?

- Ⓐ 4:00
Ⓑ 4:05
Ⓒ 4:10
Ⓓ 4:15

50. Andy wakes up at 6:52 a.m. and has to be at work at 8:00 a.m. How much time does he have to get ready and get to work?

- Ⓐ 2 hours
Ⓑ 1 hour and 27 minutes
Ⓒ 1 hour and 8 minutes
Ⓓ 58 minutes