

2-6-2025
2-7-2025

Subtraction with Regrouping

Practice 16

Solve each problem.

$$\begin{array}{r} 811 \\ - 42 \\ \hline 49 \end{array}$$

$$\begin{array}{r} 567 \\ - 58 \\ \hline 09 \end{array}$$

$$\begin{array}{r} 672 \\ - 53 \\ \hline 19 \end{array}$$

$$\begin{array}{r} 784 \\ - 19 \\ \hline 65 \end{array}$$

$$\begin{array}{r} 480 \\ - 17 \\ \hline 53 \end{array}$$

$$\begin{array}{r} 233 \\ - 15 \\ \hline 18 \end{array}$$

$$\begin{array}{r} 454 \\ - 19 \\ \hline 35 \end{array}$$

$$\begin{array}{r} 565 \\ - 47 \\ \hline 18 \end{array}$$

$$\begin{array}{r} 893 \\ - 86 \\ \hline 07 \end{array}$$

$$\begin{array}{r} 783 \\ - 39 \\ \hline 44 \end{array}$$

$$\begin{array}{r} 715 \\ - 28 \\ \hline 57 \end{array}$$

$$\begin{array}{r} 612 \\ - 18 \\ \hline 55 \end{array}$$

$$\begin{array}{r} 311 \\ - 23 \\ \hline 18 \end{array}$$

$$\begin{array}{r} 414 \\ - 16 \\ \hline 38 \end{array}$$

$$\begin{array}{r} 513 \\ - 37 \\ \hline 26 \end{array}$$

$$\begin{array}{r} 516 \\ - 39 \\ \hline 27 \end{array}$$

$$\begin{array}{r} 811 \\ - 18 \\ \hline 73 \end{array}$$

$$\begin{array}{r} 514 \\ - 47 \\ \hline 17 \end{array}$$

$$\begin{array}{r} 810 \\ - 74 \\ \hline 16 \end{array}$$

$$\begin{array}{r} 712 \\ - 25 \\ \hline 59 \end{array}$$

last 2 rows helped show diff

Feb 7, 2025

Action All Around

When a verb tells what one person or thing is doing now, it usually ends in s.

Example: She **sings**.

When a verb is used with you, I, or we, do not add an s.

Example: I **sing**.

Directions: ^{circle} Write the correct verb in each sentence.

Example: I write a newspaper about our street.

writes write

1. My sister _____ me sometimes.

helps help

2. She _____ the pictures.

draw draws

3. We _____ them together.

delivers deliver

4. I _____ the news about all the people.

tell tells

5. Mr. Macon _____ the most beautiful flowers.

grow grows

6. Mrs. Chen _____ to her plants.

talks talk

7. Caleb Turner _____ his dog loose every day.

lets let

8. You may _____ I live on an interesting street.

thinks think



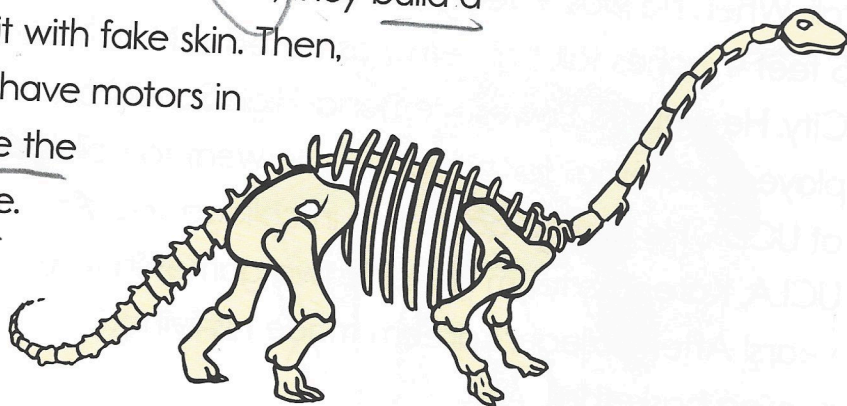
Feb 7, 2025

Model Mania

baked dinosaur bone candy
into brownies!

Some people can build models of dinosaurs. The models are fakes, of course. But they are life-size, and they look real! The people who build them must know the dinosaur inside and out. First, they build a skeleton. Then, they cover it with fake skin. Then, they paint it. Some models have motors in them. The motors can make the dinosaur's head or tail move.

Have you ever seen a life-size model of a dinosaur?



Directions: Answer these questions about dinosaur models.

1. Circle the main idea:

Some models of dinosaurs have motors in them.

Some people can build life-size models of dinosaurs that look real.

2. What do the motors in model dinosaurs do? They make

of no such head or tail move

3. What is the first step in making a model dinosaur? build a skeleton.

4. Why do dinosaur models look real? they are life size


Feb. 10, 2025

The Frilly Lizard

bi = 2 ✓
Tri = 3 ✓
Quad = 4 ✓

Triceratops was one of the last dinosaurs to develop. It lived in the Cretaceous (kre-tay-shus) period of history. It was in this time that the dinosaurs became extinct. Triceratops means "three-horned lizard." It was a strong dinosaur and able to defend itself well since it lived during the same time period as Tyrannosaurus rex.

Triceratops was a plant-eating dinosaur. Its body was 20 feet long, and its head, including the three horns and bony "frill," was another $6\frac{1}{2}$ feet.



Directions: Answer these questions about Triceratops.

1. Dinosaurs became extinct during the Cretaceous period of history.
2. What does **Triceratops** mean? Dinosaur with 3 horns
3. What information above tells you that Triceratops was able to defend itself?

Strong

Feb. 10, 2025

Breaking the Rules



Directions: Circle the verb that completes each sentence.

1. Scientists will try to (find, found) the cure.



2. Eric (brings, brought) his lunch to school yesterday.

3. Every day, Grace (sings, sang) all the way home.




4. Jason (breaks, broke) the vase last night.

5. The ice had (freezes, frozen) in the tray.

6. Mitzi has (swims, swum) in that pool before.


7. Now, I (choose, chose) to exercise daily.



8. The teacher has (rings, rung) the bell.

Liam O'cale

Feb. 10, 2025



Smile

Share

Math

Best
gamer

**I am
awesome
because...**

Feeding

Ignore
Bad
Behavior

Soccer

basketball


ignoring
Bob

Feb 11, 2025

Swamp Creature



Apatosaurus lived in the swamps. Swamps are wet areas where many plants grow. Here are the names of other kinds of dinosaurs that lived in swamps: Diplodocus (dip-low-dock-us), Brachiosaurus (bracky-o-saur-us), and Cetiosaurus (set-e-o-saur-us). These dinosaurs had small heads and small brains. They weighed 20 tons or more. They grew to be 60 feet long! These animals did not need to have sharp teeth.



Directions: Answer these questions about Apatosaurus and other big dinosaurs.

1. These big dinosaurs did not have sharp teeth. What did they eat?

plants

2. Why were swamps a good place for these big dinosaurs to live?

Swamps are wet

3. The dinosaurs in the passage had small brains. Do you think they were smart? Why?

birds have small brains too.



4. Name three kinds of dinosaurs that lived in swamps.

Brachiosaurus
Cetiosaurus
Diplodocus

Name

L'94 OCOA

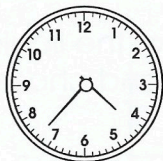
Jan 27, 2025

Feb 11 2025
- reviewed again

Time

What time is shown on the clocks below? Fill in the bubble of the correct answer.

45.



- Ⓐ 7:20
Ⓑ 4:08
Ⓒ 4:37
Ⓓ 7:40

46.





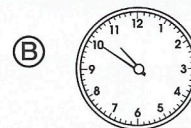
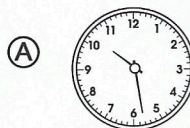
- Ⓐ 10:02
Ⓑ 12:50
Ⓒ 2:10
Ⓓ 12:10

47. Ella started practicing piano at 6:20 p.m. She finished practicing at 6:55 p.m. How many minutes did Ella spend practicing piano?

- Ⓐ 20
Ⓑ 25
Ⓒ 30
Ⓓ 35

55
20
35

48. Seth ran a marathon last Saturday. The marathon started at 7:00 a.m. It took Seth 4 hours and 28 minutes to complete the race. What time did Seth finish the race? Choose the clock that shows the correct time.



49. Shannon arrived at the movie theater at 4:30 p.m. The drive from her house to the theater takes 20 minutes. What time did Shannon leave her home to go to the movie theater?

- Ⓐ 4:00
Ⓑ 4:05
Ⓒ 4:10
Ⓓ 4:15

50. Andy wakes up at 6:52 a.m. and has to be at work at 8:00 a.m. How much time does he have to get ready and get to work?

- Ⓐ 2 hours
Ⓑ 1 hour and 27 minutes
Ⓒ 1 hour and 8 minutes
Ⓓ 58 minutes

Feb. 11, 2025

Subtract and Check

Liam

Practice 17

Solve each problem. Add to check.

$$\begin{array}{r} 1. \quad 83 \\ - 47 \\ \hline \end{array}$$

36

$$\begin{array}{r} 2. \quad 80 \\ - 59 \\ \hline \end{array}$$

21

3.

$$\begin{array}{r} 4. \quad 56 \\ - 19 \\ \hline \end{array}$$

37

$$\begin{array}{r} 5. \quad 32 \\ - 13 \\ \hline \end{array}$$

19

6.

$$\begin{array}{r} 7. \quad 88 \\ - 79 \\ \hline \end{array}$$

09

$$\begin{array}{r} 8. \quad 63 \\ - 56 \\ \hline \end{array}$$

07

9.

$$\begin{array}{r} 10. \quad 41 \\ - 17 \\ \hline \end{array}$$

24

$$\begin{array}{r} 11. \quad 95 \\ - 69 \\ \hline \end{array}$$

26

12.

$$\begin{array}{r} 13. \quad 81 \\ - 44 \\ \hline \end{array}$$

37

$$\begin{array}{r} 14. \quad 25 \\ - 16 \\ \hline \end{array}$$

09


15.

Feb 12, 2025

Crazy for Catnip!

please circle the quotations & paragraphs

Do you have a cat? Do you have catnip growing around your home? If you don't know, your cat probably does. Cats love the catnip plant and can be seen rolling around in it. Some cat toys have catnip inside them because cats love it so much.



People can enjoy catnip, too. Some people make catnip tea with the leaves of the plant. It is similar to using mint to make tea.

Another refreshing drink can be made with the berries of the sumac bush or tree. Native Americans would pick the red berries, crush them, and add water to make a thirst-quenching drink. The berries were sour, but the cool, tart drink was refreshing. Does this remind you of lemonade?

Directions: Answer these questions about unusual plants.

1. What is the main idea of the first two paragraphs above? _____

Catnip plant

2. Write two ways cats show that they love catnip.

a) they roll in it

b) in state toys

3. How can people use catnip? teas

Feb 12, 2025

\$ pokemon sticker puzzle

Under the Big Top

Possessive nouns tell who or what is the owner of something. With **singular nouns**, use an **apostrophe before the s**. With **plural nouns**, use an **apostrophe after the s**.

Example:

singular: one elephant

The **elephant's** dance was wonderful.

plural: more than one elephant

The **elephants'** dance was wonderful.

Directions: Put the apostrophe in the correct place in each bold word. Then, write the word in the blank.



1. The **lions** cage was big.

lions's

2. The **bears** costumes were purple.

bears's

3. One **boys** laughter was very loud.

boy's

4. The **trainers** dogs were dancing about.

trainers's

5. The **mans** popcorn was tasty and good.

man's

6. **Marks** cotton candy was delicious.

marks's

Feb. 12, 2025

diff. ways of writing

Practice 25

Solve each problem.

$$\begin{array}{r} 1. \quad 528 \\ + 261 \\ \hline \end{array}$$

789

$$\begin{array}{r} 2. \quad 341 \\ + 528 \\ \hline \end{array}$$

869

$$\begin{array}{r} 3. \quad 376 \\ + 401 \\ \hline \end{array}$$

777

$$\begin{array}{r} 4. \quad 513 \\ + 123 \\ \hline \end{array}$$

636

$$\begin{array}{r} 5. \quad 11 \\ + 76 \\ \hline \end{array}$$

87

$$\begin{array}{r} 6. \quad 192 \\ + 604 \\ \hline \end{array}$$

796

$$\begin{array}{r} 7. \quad 349 \\ + 640 \\ \hline \end{array}$$

989

$$\begin{array}{r} 8. \quad 229 \\ + 110 \\ \hline \end{array}$$

339

$$\begin{array}{r} 9. \quad 425 \\ + 362 \\ \hline \end{array}$$

787

$$\begin{array}{r} 10. \quad 43 \\ + 13 \\ \hline \end{array}$$

56

$$\begin{array}{r} 11. \quad 174 \\ + 721 \\ \hline \end{array}$$

895

$$\begin{array}{r} 12. \quad 306 \\ + 481 \\ \hline \end{array}$$

787

$$\begin{array}{r} 13. \quad 872 \\ + 114 \\ \hline \end{array}$$

986

$$\begin{array}{r} 14. \quad 588 \\ + 311 \\ \hline \end{array}$$

899

$$\begin{array}{r} 15. \quad 57 \\ + 20 \\ \hline \end{array}$$

77

$$\begin{array}{r} 16. \quad 312 \\ + 156 \\ \hline \end{array}$$

468

$$\begin{array}{r} 17. \quad 199 \\ + 400 \\ \hline \end{array}$$

599

$$\begin{array}{r} 18. \quad 335 \\ + 244 \\ \hline \end{array}$$

579

$$\begin{array}{r} 19. \quad 385 \\ + 614 \\ \hline \end{array}$$

999

$$\begin{array}{r} 20. \quad 8 \\ + 1 \\ \hline \end{array}$$

9

Liam

2/12/2025

Subtraction with Regrouping

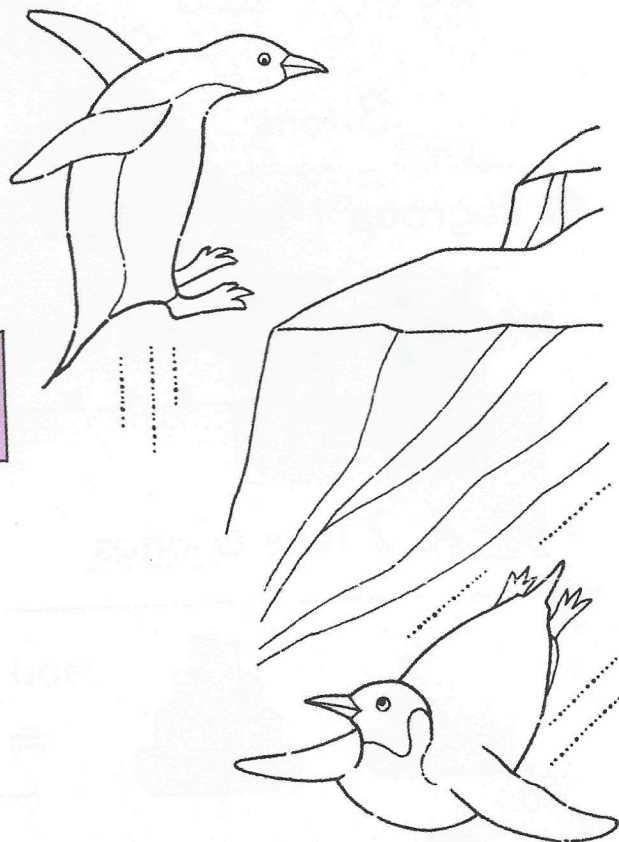
When you cannot subtract the bottom number from the top number, this is what you must do:

Subtract.

$$\begin{array}{r} 51 \\ 62 \\ -14 \\ \hline 48 \end{array}$$

Regroup.

tens	ones
6 ⁵	2 ¹²
-1	4



Subtract the ones first.

tens	ones
6 ⁵	2 ¹²
-1	4
	8

Subtract the tens next.

tens	ones
6 ⁵	2 ¹²
-1	4
4	8

Subtract.

A.

tens	ones
8 ⁷	2 ¹²
-	6
7	6

tens	ones
8 ⁷	2 ¹²
-	6
7	6

tens	ones
8 ⁷	2 ¹²
-	6
7	6

tens	ones	+	tens	ones
6 ⁵	2 ¹²	+	5 ⁴	2 ¹²
-	6		-	6
5	6		4	6

B.

$$\begin{array}{r} 51 \\ 65 \\ -18 \\ \hline 47 \end{array}$$



$$\begin{array}{r} 71 \\ 86 \\ -7 \\ \hline 79 \end{array}$$

$$\begin{array}{r} 41 \\ 53 \\ -25 \\ \hline 28 \end{array}$$

$$\begin{array}{r} 21 \\ 30 \\ -17 \\ \hline 13 \end{array}$$

$$\begin{array}{r} 31 \\ 81 \\ -34 \\ \hline 47 \end{array}$$

Pokémon™



SCAN
TO PLAY



happymeal.com